

8.5/10

Name and ID

[Redacted Name and ID]

Circle the correct answer

1) *Euglena* is plant-like protists, which are photosynthetic organisms

(A) True

(B) False

2. What is the scientific (Latin) name of the human?

Homo sapiens

Scientific classification of humans

Kingdom:

Animalia

Phylum:

Chordata

Class:

Mammalia

Order:

Primates

Suborder:

Haplorhini

Family:

Hominidae

Genus:

Homo

Species:

sapiens




3. Explain the underlined words:

Domain Eubacteria: This domain consists of prokaryotic unicellular organisms. The cells of most Eubacteria can be classified based on their shape: coccus, bacillus (rod shaped), or spirillum (helical shape).

Prokaryotic:

Unicellular: ~~just one cell~~ just one cell ~~it has~~ has

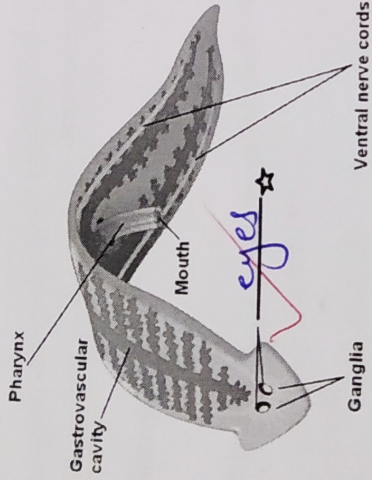
Coccus:



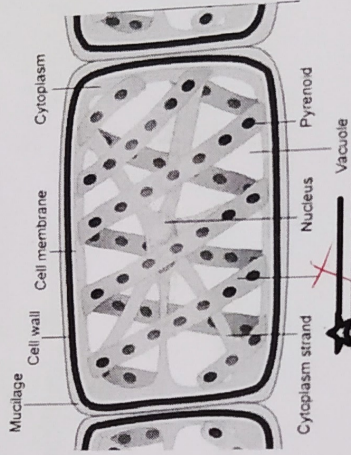
4. Fill in the blank

(a) Humans belong to Kingdom Animalia

(b) Look at the pictures below; give names of the organisms, and label parts with stars.



Name: planaria



Name: paramecium

(d) Name the parts of the microscopic organism with (\*\*) on the above picture.

5. What is a carbohydrate? Carboh

6. What is the meaning of

- mono: one of saccharids.
- di: two of monosaccharids
- poly: more than two of monosaccharids