

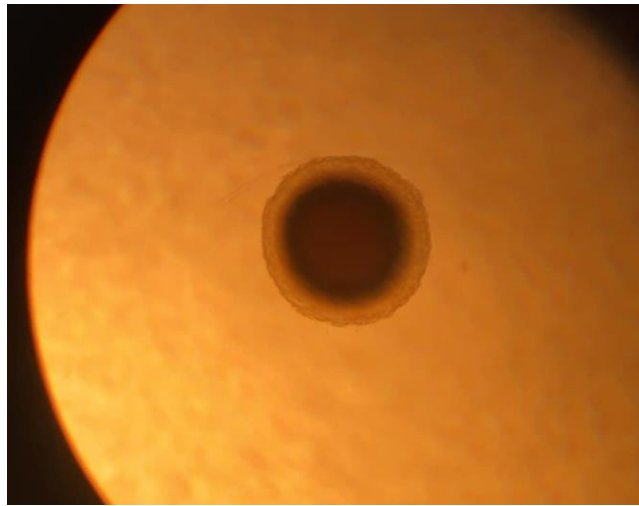
**Birzeit University**  
**Department of Biology and Biochemistry**  
**Invertebrate Zoology Laboratory**  
**Biol242 Final Exam**  
**4/2/2021**

Name and ID:

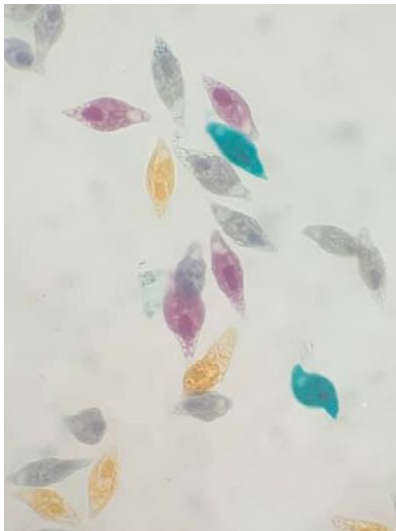
instructor: Dr.Ademar

---

- 1) A) Give a title for this slide \_\_\_\_\_.  
B) This structure is related to phylum \_\_\_\_\_.



- 2) A) The name of this organism is \_\_\_\_\_.  
B) This organism belongs to phylum \_\_\_\_\_.



- 3) A) Give a title for this slide\_\_\_\_\_.
- B) This organism moves by\_\_\_\_\_.



- 4) A) Give a title for this slide\_\_\_\_\_.
- B) (T/F) Humans who eat undercooked meat are infected with this species.



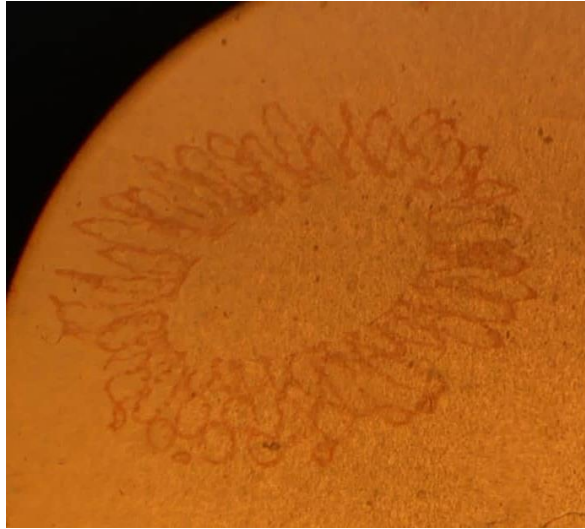
- 5) A) Name this organism \_\_\_\_\_.
- B) Is it male or female \_\_\_\_\_.



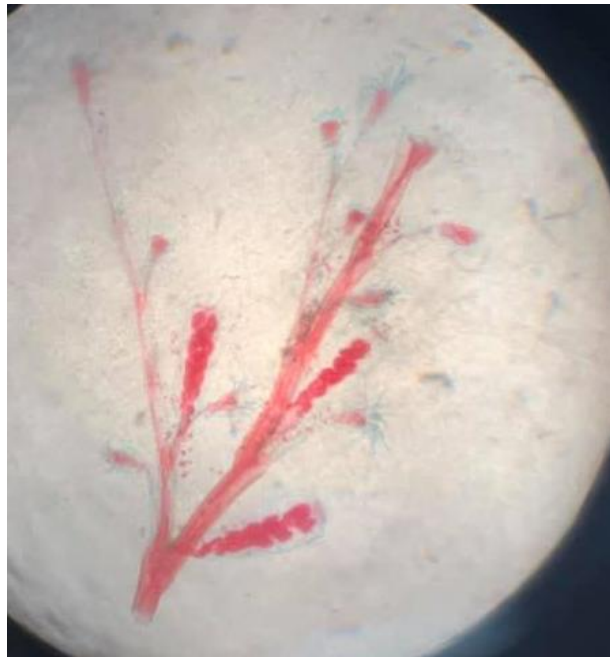
- 6) A) Give a title for this slide \_\_\_\_\_.
- B) This organism belongs to phylum \_\_\_\_\_.




- 7) A) Give a title for this slide \_\_\_\_\_.
- B) This organism belongs to phylum \_\_\_\_\_.



- 8) A) Give a title for this slide \_\_\_\_\_.
- B) This organism belongs to phylum \_\_\_\_\_.



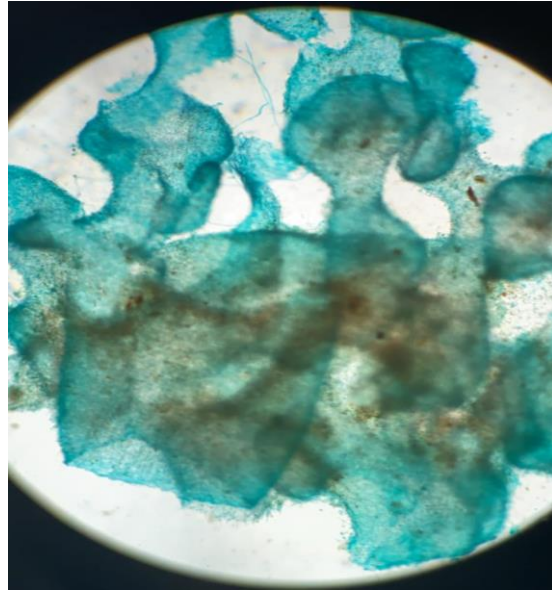
- 9) A) The name of this organism is \_\_\_\_\_.
- B) This organism belongs to phylum \_\_\_\_\_.



- 10) A) Give a title for this slide \_\_\_\_\_.
- B) Is this sexual or asexual reproduction \_\_\_\_\_.



- 11) A) Give a title for this slide\_\_\_\_\_.
- B) This organism belongs to phylum\_\_\_\_\_.



- 12) A) Give a title for this slide\_\_\_\_\_.
- B) This organism belongs to phylum\_\_\_\_\_.



- 13) A) Give a title for this slide \_\_\_\_\_.
- B) This organism belongs to phylum \_\_\_\_\_.



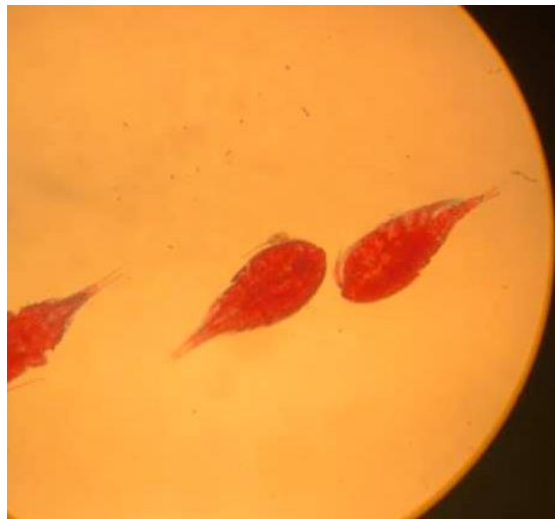
- 14) A) Give a name for this sample \_\_\_\_\_.
- B) This organism belongs to class \_\_\_\_\_.



- 15) A) Give a title for this slide \_\_\_\_\_.  
B) This organism belongs to phylum \_\_\_\_\_.

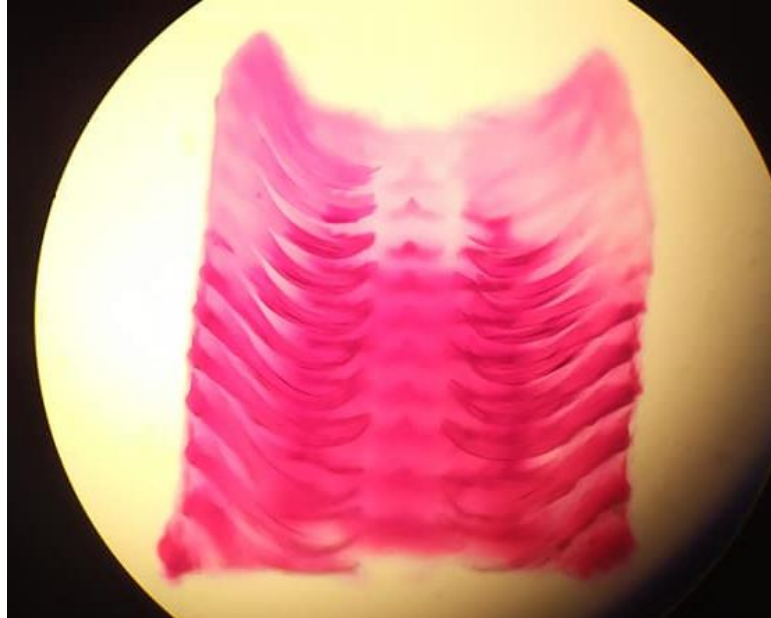


- 16) A) Give a title for this slide \_\_\_\_\_.  
B) This organism belongs to phylum \_\_\_\_\_.

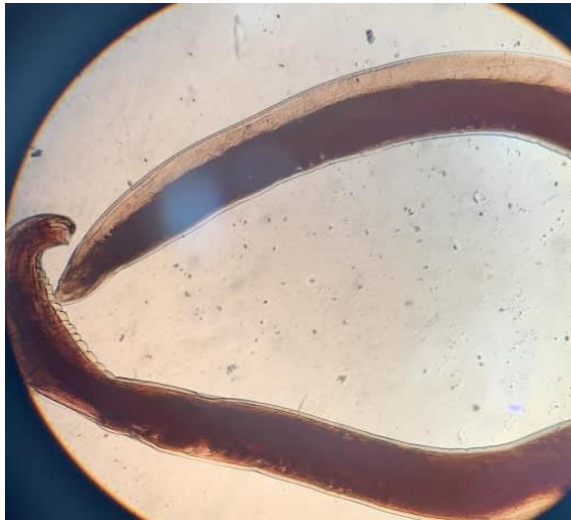




- 17) A) Give a title for this slide \_\_\_\_\_.
- B) The main function for this structure is \_\_\_\_\_.



- 18) A) Give a title for this slide \_\_\_\_\_.
- B) This organism belongs to phylum \_\_\_\_\_.



- 19) A) Give a title for this slide \_\_\_\_\_.
- B) This organism belongs to phylum \_\_\_\_\_.



- 20) A) The name of this organism is \_\_\_\_\_.
- B) Name one defensive mechanism for this organism \_\_\_\_\_.



**GOOD LUCK!**