



Department of Electrical and Computer Engineering

Summer Semester - 2021/2022

ENCS2340 | Digital Systems

First Exam, August 8, 2022

Time Allowed: 60 Minutes

16

Name	Yazan AbuAlwan
ID	1210145
Section	03

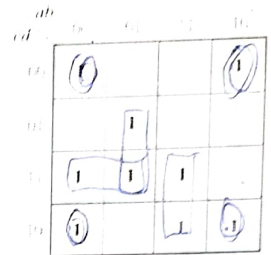
1	2	3	4	5	6	7	8	9	10
C	D	E	E	E	A	B	A	B	B

11	12	13	14	15	16	17	18	19	20
E	^C D	A B	A D	B D E	D	A	B	D	C

Choose the correct answer of the following questions:

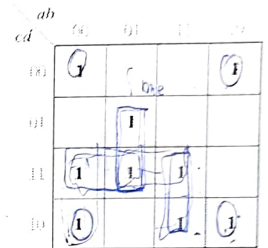
1. The following K-Map is a representation of the following function:

- A. $f = b'c'd' + bcd + acd' + a'b'c + a'bc'd$
- B. $f = b'c'd' + bd' + acd' + a'bc'd$
- C. $f = b'c'd' + bcd + acd' + a'b'c + a'bc$
- D. $f = bcd + acd' + a'b'c + a'bc'd$
- E. $f = b'c'd' + acd' + a'b'c + a'bc'd$



2. For the following K-Map, there are:

- A. 4 prime implicants and all of them are essential
- B. 4 prime implicants and none of them are essential
- C. 5 prime implicants and 2 of them are essential
- D. 7 prime implicants and 2 of them are essential
- E. 5 prime implicants and 1 of them are essential



3. The minimum sum-of-products expression for the following function is:

$f(a, b, c, d) = \Pi(1, 9, 11, 12, 14)$

$\Sigma(0, 2, 3, 4, 5, 6)$

- A. $F = a'c + b'd' + bd + a'd$
- B. $F = a'c + b'd' + bd + a'b$
- C. $F = a'c + b'd' + bd + a'b$
- D. $F = a'c + b'd' + bd + ad'$
- E. None of the above

$b'd' + abc$

4. The minimum products-of-sum expression for the following function is:

$f(a, b, c, d) = \Sigma m(1, 3, 4, 11) + \Sigma d(2, 7, 8, 12, 14, 15)$

- A. $f = (a' + c')(b')(b + d)(c' + d')$
- B. $f = (a' + c)(b' + d')(b' + d)(c + d)$
- C. $f = (a' + c)(b' + d')(b + d)$
- D. $f = (a' + c)(b' + d')(b + d)(b' + c')$
- E. none of the above

$(1, 2, 3, 4, 7, 8, 11, 12, 14, 15)$

5. The implementation of the following function using NAND gates is:

$F = wxy + wx'y' + wz$

- A. $(wxy)' + (wx'y')' + (wz)$
- B. $(wxy) + (wx'y')' + (wz)'$
- C. $(w+x+y) \cdot (w+x'+y')' \cdot (w+z)'$
- D. $(wxy)' + (wx'y')' + (wz)'$
- E. $((wxy)' \cdot (wx'y')' \cdot (wz)')'$

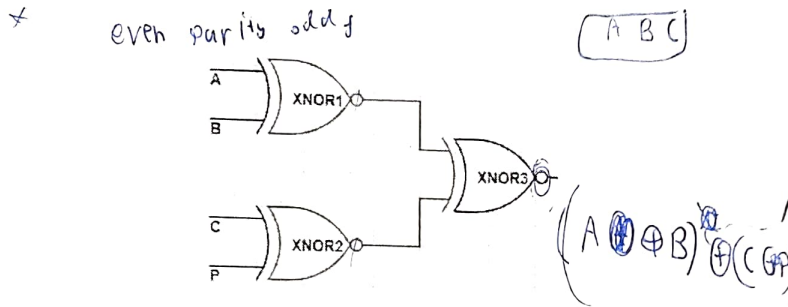
$((wxy)' \cdot (wx'y')' \cdot (wz)')'$

even parity

A checker 3 bit

6. The following circuit represents:

- A. 3 Bit Odd Parity Checker circuit
- B. 3 Bit Even Parity Checker circuit
- C. 4 Bit odd Parity Generator circuit
- D. 4 Bit Even Parity Generator circuit
- E. None of the above



7. Given the following expression, which of the following is the most simplified equivalent:

$$F = (AB)' \cdot (A'+B) \cdot (B'+B)$$

- A. $(A'+B)$
- B. A'
- C. $(AB)' \cdot (B'+B)$
- D. $(B'+B)$
- E. $(AB)' \cdot (A'+B)$

$(A'+B') \cdot (A'+B)$ (1) (1)

$$(A'+B')(A') + (A'+B')(B)$$

$$A' + A'B' + A'B + 0$$

8. Given $F(x,y,z) = x + yz$, then the representation of F' in product of maxterms is:

- A. $\Pi(3, 4, 5, 6, 7)$
- B. $\Sigma(3, 4, 5, 6, 7)$
- C. $\Sigma(0,1)$
- D. $\Pi(0,1,2)$
- E. $\Pi(0,1)$

$$A' (B'+B)$$

$$A' + A'$$

9. The dual of the following expression is:

$$(AB' + C)D' + E$$

- A. $AB'D' + CD' + E$
- B. $(A + B' + D')(C + D')E$
- C. $(A' + B + D)(C' + D)E'$
- D. None of the above

$$((A + B'), C) + d')$$

$$(A + B' + d'), (C + d') \cdot E$$

10. The largest fraction value if m fraction digits are used in radix r is:

- A. $-r^{-m}$
- B. $1 - r^{-m}$
- C. $r^m - 1$
- D. $1 - r^m$
- E. None of the above

* $1 - \frac{1}{r} = 0.25$ (2 bits)

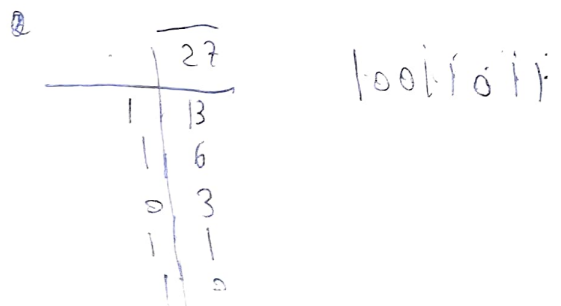
$1 - \frac{1}{2} = 0.5$ (1 bit)

$100 \cdot \frac{1}{4} = 0.25$

$1 \times 2^{-1} + 2 \times 2^{-2} = 0.5 + 0.25 = 0.75$

11. The 8-bit binary representation of -27 using signed magnitude is:

- A. 111111011
- B. 000011011
- C. 100011011
- D. 000011011
- E. None of the above



12. The $(670 - 831)$ using 9's complement method is

- A. 168
- B. 838
- C. 9's complement of 161
- D. 9's complement of 838
- E. $-(9's \text{ complement of } 838)$

670

~~831~~

670

0831
 0670
 9168

13. The binary number of the following gray code is

10010010

- A. 11100011
- B. 00010010
- C. 10010001
- D. 11101101
- E. None of the above

gray to binary
 10010010
 11100011

9838
 0161

14. The octal value of the following decimal value is:

$(57.5)_{10}$

- A. 71.4
- B. 74.625
- C. 17.25
- D. 47.526

0.5
 8x
 4.0

57
 1 | 78
 7 | 0

71.4

7x8 + 1 + 4x

15. Given that A, B, and C are numbers, and let $C = A + B$ or $C = A - B$, the overflow will occurred if:

- A. $(+A) + (+B) = -C$
- B. $(-A) + (-B) = +C$
- C. $(+A) - (-B) = -C$
- D. $(-A) - (+B) = +C$
- E. All of the above

-2^n
 A+B B-A
 A-B
 A+ (2ⁿ - B)
 A-B + 2ⁿ

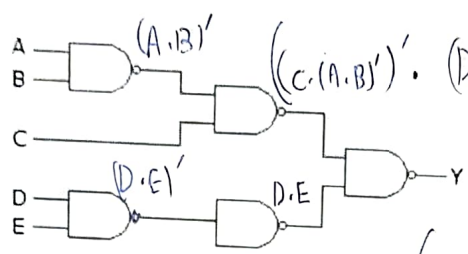
16. In 2's complement representation, the number 11100101 represents the decimal value of:

- A. 37
- B. -31
- C. 27
- D. -27
- E. -101

00011011

1 + 2 + 8 + 16

17. The circuit of the following figure realizes the function:



- A. $Y = (A' + B')C + (DE)'$
- B. $Y = A' + B' + C' + D' + E'$
- C. $Y = AB + C + DE$
- D. $Y = AB + C(D + E)$
- E. None of the above

$$\left((C \cdot (A \cdot B))' + (D \cdot E) \right) \cdot (C' + (A \cdot B))' \cdot (D \cdot E)$$

$$(C \cdot (A \cdot B))' + (D' + E')$$

$$C \cdot (A' + B')$$

18. The department of computer engineering has 50 courses, if we assign a code to each course, what is the minimum number of bits required:

- A. 5
- B. 6
- C. 7
- D. 4
- E. None of the above.

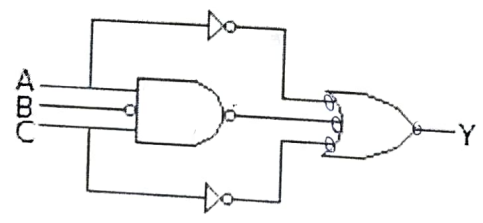
64

$$2^n = 50$$

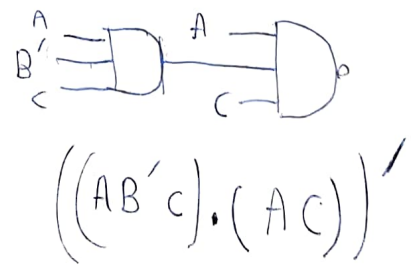
$\log_2(50) = 6 \text{ bits}$

$2^6 = 64$

19. For the logic circuit of the given figure, the minimize expression is:



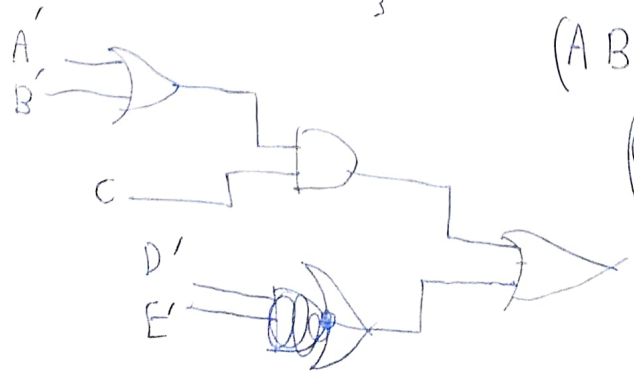
- A. $Y = A + B + C$
- B. $Y = A + B$
- C. $Y = ABC$
- D. $Y = (AB'C)'$
- E. None of the above



$$\left((AB'C) \cdot (AC) \right)'$$

20. There are Minterms for an n input variables:

- A. n
- B. n-1
- C. 2^n
- D. $2^n - 1$
- E. $n^{n-1} - 1$



$$(A+B)C + (D'+E')$$

$$(A+B)C + (DE)'$$