

Name: _____

ID: _____

Section: 10-11, 12-1

Key

Question 1: [10 marks]

a) For what values of ω is the signal $x(n) = A \cos(\omega n)$ periodic with period of 6? [4pts]

$$\omega N = 2\pi k \Rightarrow \omega = \frac{2\pi k}{N}, N=6 \Rightarrow$$

$$\omega = \frac{2\pi k}{6} = \frac{\pi k}{3}, k=1, 2, 3, \dots$$

$$\omega = \frac{\pi}{3}, \frac{2\pi}{3}, \pi, \frac{4\pi}{3}, \dots$$

b) A causal discrete linear time invariant system has the following input, $x(n]$, and output, $y(n]$,:

$$x(n) = \left(\frac{1}{2}\right)^n u(n) - \frac{1}{4} \left(\frac{1}{2}\right)^{n-1} u(n-1)$$

$$y(n) = \left(\frac{1}{3}\right)^n u(n)$$

Where $u[n]$ is the unit step sequence. Determine the system function $H(z)$ and its Region of Convergence (ROC). Comment on the stability of this system. [6pts]

$$X(z) = \frac{1}{1 - \frac{1}{2}z^{-1}} * \frac{\frac{1}{4}z^{-1}}{1 - \frac{1}{2}z^{-1}} = \frac{1 * \frac{1}{4}z^{-1}}{1 - \frac{1}{2}z^{-1}}, |z| > \frac{1}{2}$$

$$Y(z) = \frac{1}{1 - \frac{1}{3}z^{-1}}, |z| > \frac{1}{3}$$

$$H(z) = \frac{Y(z)}{X(z)} = \frac{1}{1 - \frac{1}{3}z^{-1}} * \frac{1 - \frac{1}{2}z^{-1}}{1 * \frac{1}{4}z^{-1}} = \frac{1 - \frac{1}{2}z^{-1}}{\left(1 - \frac{1}{3}z^{-1}\right)\left(1 + \frac{1}{4}z^{-1}\right)}, |z| > \frac{1}{3}$$

Since ROC ($|z| > \frac{1}{3}$) includes unit circle ($z=1$) \Rightarrow
 \Rightarrow System is stable.

Question 2: [10 marks]

a) Show that the z-transform of sequence $x(n - n_0]$ is $Z^{-n_0} X(Z)$? [2pts]

$$\mathcal{Z}\{x(n)\} = \sum_{n=-\infty}^{\infty} x(n) z^{-n} = X(z)$$

$$\begin{aligned} \mathcal{Z}\{x(n - n_0)\} &= \sum_{n=-\infty}^{\infty} x(n - n_0) z^{-n}, \text{ let } m = n - n_0 \Rightarrow \sum_{m=-\infty}^{\infty} x(m) z^{-(m+n_0)} \\ &= z^{-n_0} \sum_{m=-\infty}^{\infty} x(m) z^{-m} = z^{-n_0} \mathcal{Z}\{x(m)\} = z^{-n_0} X(z) \end{aligned}$$

b) Consider the following system function of an LTI system:

$$H(z) = \frac{(1 - 1.5z^{-1})(1 - \frac{1+j}{2}z^{-1})(1 - \frac{1-j}{2}z^{-1})}{(1 - 0.8e^{j\frac{2\pi}{3}}z^{-1})(1 - 0.8e^{-j\frac{2\pi}{3}}z^{-1})(1 - \frac{2}{3}z^{-1})}, \text{ ROC } |z| > 0.8$$

i) Is this system stable? Why? [1pt]

Yes, stable because ROC ($|z| > 0.8$) includes unit circle.

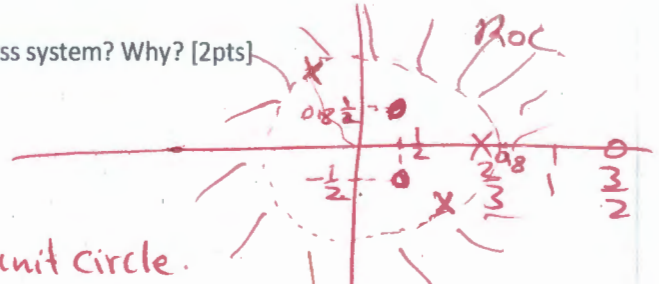
Is it an FIR or IIR system? Why? [1pt]

IIR because it has poles which are not cancelled by zeros.

ii) Plot the pole-zero diagram. Is this system a minimum-phase or all-pass system? Why? [2pts]

Poles: $\frac{2}{3}, 0.8 e^{j\frac{2\pi}{3}}$

Zeros: $1.5, \frac{1}{2} + \frac{1}{2}j, \frac{1}{2} - \frac{1}{2}j$

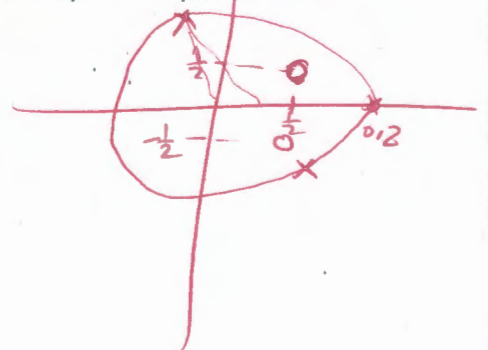


* Not min. phase because it has zero outside unit circle.

* Not All-pass because it has two zeros which don't have conjugate reciprocal poles.

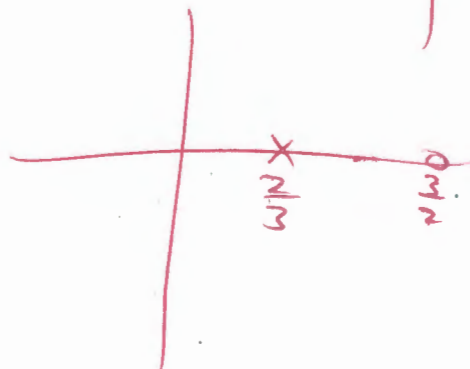
iii) Express $H(z)$ as a combination of an all-pass filter and a minimum-phase filter. Draw the pole-zero plots for each of these filters. [4pts]

min. phase: $H_{min}(z) = \frac{(1 - \frac{1+j}{2}z^{-1})(1 - \frac{1-j}{2}z^{-1})}{(1 - 0.8e^{j\frac{2\pi}{3}}z^{-1})(1 - 0.8e^{-j\frac{2\pi}{3}}z^{-1})}$



All-pass:

$$H_{ap}(z) = \frac{z^{-1} - \frac{2}{3}}{1 - \frac{2}{3}z^{-1}}$$



Question 3: [10 marks]

a) Consider a first-order FIR digital filter, which is described by the following difference equation:

$$y(n] = x[n] - ax[n-1], \quad a \neq 0$$

Find the coefficient (a) such that -3dB cut-off frequency is $\frac{\pi}{4}$? [4pts]

$$H(e^{j\omega}) = 1 - ae^{-j\omega} = 1 - a(\cos\omega - j\sin\omega)$$

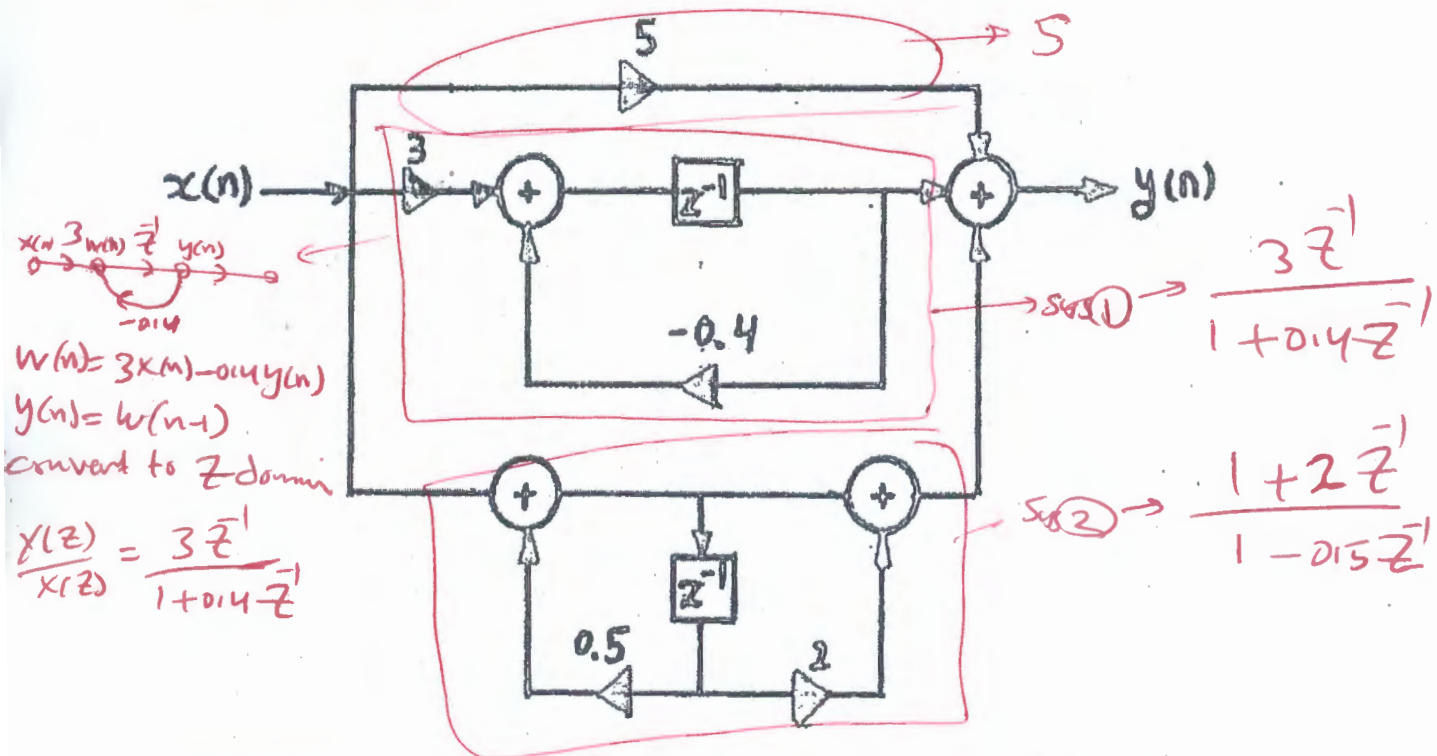
$$= 1 - a\cos\omega - ja\sin\omega$$

$$|H(e^{j\omega})|^2 = (1 - a\cos\omega)^2 + a^2\sin^2\omega$$

$$\text{to } \log_{10} |H(e^{j\frac{\pi}{4}})|^2 = -3 \Rightarrow (1 - a\cos\frac{\pi}{4})^2 + a^2\sin^2\frac{\pi}{4} = 10^{-0.3} = 0.15$$

$$\Rightarrow a^2\sqrt{2}a + 0.15 = 0 \Rightarrow a = \frac{1}{\sqrt{2}} = 0.707$$

b) Consider the following digital filter



i) Determine the impulse response, $h(n)$, of this system and plot it for $n=0,1,2$ and 3? [3pts]

$$H(z) = 5 + \frac{3z^{-1}}{1 + 0.4z^{-1}} + \frac{1 + 2z^{-1}}{1 - 0.5z^{-1}} \quad (\text{assume causal})$$

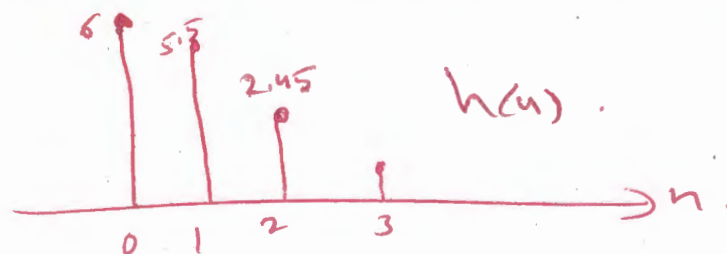
$$\Rightarrow h(n) = 5\delta(n) + 3(0.4)^n u(n-1) + (0.5)^n u(n) + 2(0.5)^{n-1} u(n-1)$$

$$h(0) = 5$$

$$h(1) = 5.5$$

$$h(2) = 2.45$$

$$h(3) =$$



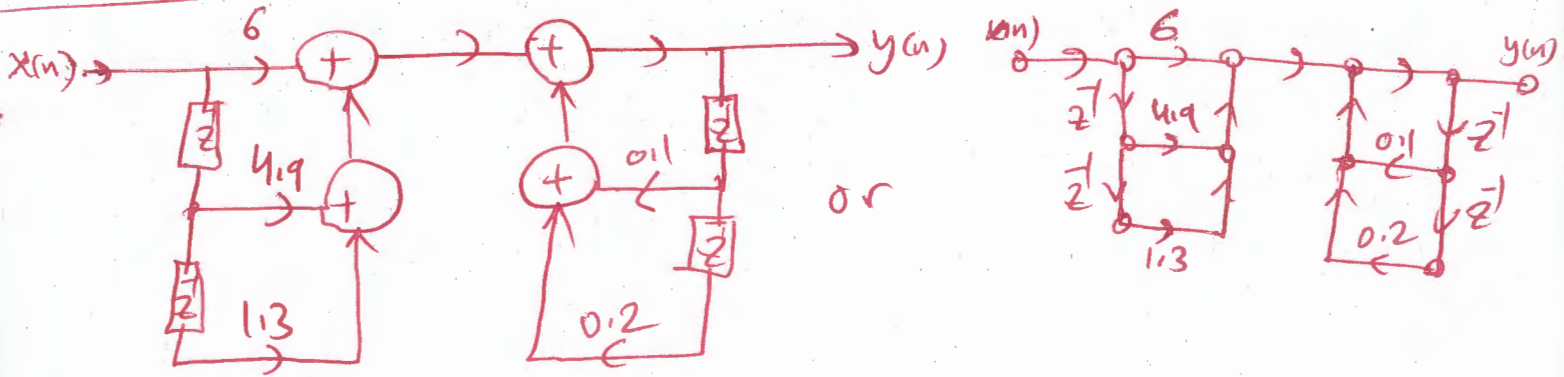
ii) Draw the realization block diagram of this system using

- Direct Form I [1pt]

by combining $H(z)$ into rational function:

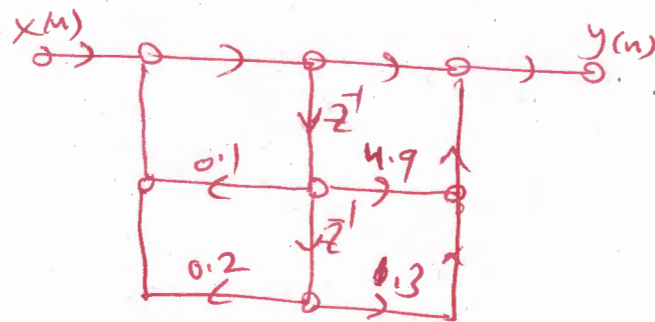
$$\Rightarrow H(z) = \frac{6 + 4.9z^{-1} + 1.3z^{-2}}{1 - 0.1z^{-1} - 0.2z^{-2}}$$

* Direct Form I

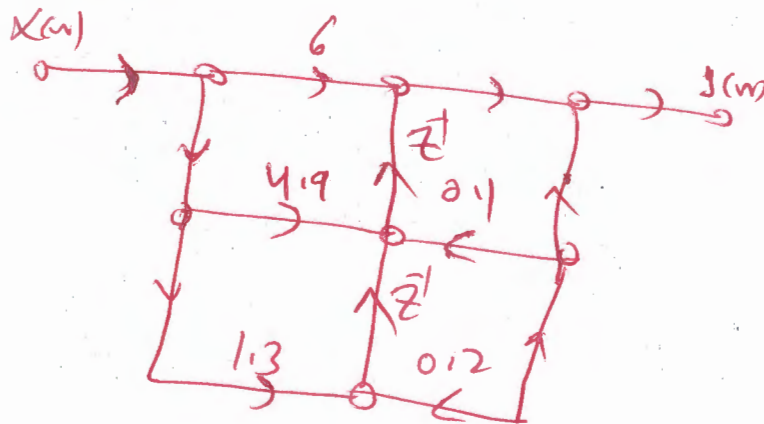


- Transposed Direct Form II [2pts]

* Direct form II :



Transposed Direct Form II



Question 4: [Bonus]

Given the following system function:

$$H(z) = \frac{3 - 2z^{-1} + 1.5z^{-4}}{1 - z^{-1} - 4z^{-2} + z^{-4}}$$

$$b = [3, -2, 0, 0, 1.5]$$

$$a = [1, -1, -4, 0, 1]$$

Write **MATLAB** statements to:

- (a) Display the magnitude response and the phase response of this system.

$$\text{freqz}(b, a);$$

- (b) Plot zero-pole diagram of the system.

$$\text{zplane}(b, a);$$

- (c) Evaluate impulse response, $h[n]$, of the system.

$$\text{impz}(b, a);$$

- (d) Find the output sequence if the following input is applied to the system $x[n] = \{2, 1, 0, 3, 2, 1\}$, for $n=0$ to 5.

$$y = \text{filter}(b, a, x);$$