

Name:

Solution

ID:

Section: 9:00 – 10:00, 12:00 – 1:00

Question	Student mark	ABET SO
1		a
2		k
3		c

Question 1: [10pts]

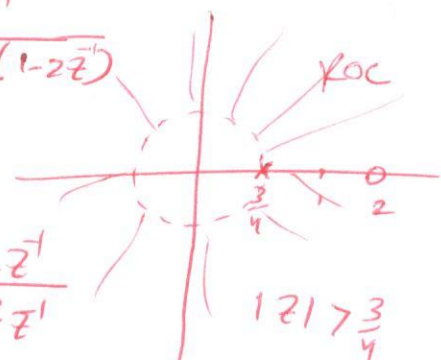
When the input to an LTI system is:

$$x(n] = \left(\frac{1}{2}\right)^n u[n] + 2^n u[-n-1] \quad \text{and} \quad y[n] = 6\left(\frac{1}{2}\right)^n u[n] - 6\left(\frac{3}{4}\right)^n u[n]$$

a) Find the system function $H(z)$ of the system. Plot the poles and zeros of $H(z)$, and indicate the ROC. [4pts]

$$X(z) = \frac{1}{1-\frac{1}{2}z^{-1}} - \frac{1}{1-2z^{-1}} \quad \frac{1}{2} < |z| < 2 \Rightarrow X(z) = \frac{-\frac{3}{2}z^{-1}}{(1-\frac{1}{2}z^{-1})(1-2z^{-1})}$$

$$Y(z) = \frac{6}{1-\frac{1}{2}z^{-1}} - \frac{6}{1-\frac{3}{4}z^{-1}} = \frac{-\frac{3}{2}z^{-1}}{(1-\frac{1}{2}z^{-1})(1-\frac{3}{4}z^{-1})} \quad |z| > \frac{3}{4}$$

$$H(z) = \frac{Y(z)}{X(z)} = \frac{-\frac{3}{2}z^{-1}}{(1-\frac{1}{2}z^{-1})(1-\frac{3}{4}z^{-1})} \cdot \frac{(1-\frac{1}{2}z^{-1})(1-2z^{-1})}{-\frac{3}{2}z^{-1}} = \frac{1-2z^{-1}}{1-\frac{3}{4}z^{-1}}$$


b) Find the impulse response $h[n]$ of the system. [3pts]

$$H(z) = \frac{1}{1-\frac{3}{4}z^{-1}} - \frac{2z^{-1}}{1-\frac{3}{4}z^{-1}} \quad |z| > \frac{3}{4}$$

So, $h[n] = \left(\frac{3}{4}\right)^n u[n] - 2\left(\frac{3}{4}\right)^{n-1} u[n-1]$

$\frac{20V}{2^2-1} = \frac{20}{4-1} = \frac{20}{3}$
 $\frac{20}{4 \log 6}$
 $u-bi!$
~~8~~

c) Write the difference equation that characterizes the system. [3pts]

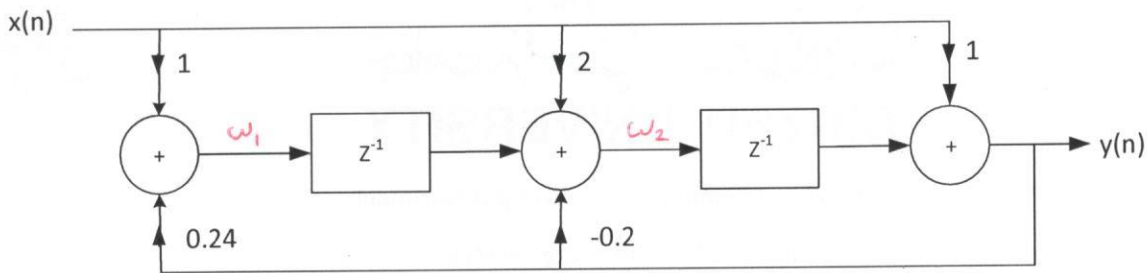
$$H(z) = \frac{1-2z^{-1}}{1-\frac{3}{4}z^{-1}} = \frac{Y(z)}{X(z)}$$

$$y[n] - \frac{3}{4}y[n-1] = x[n] - 2x[n-1]$$

4.9 mv

Question 2: [11pts]

Consider a causal digital filter shown in the following realization structure:



a) Is this a canonic structure? Explain? [1pt]

yes, because it is 2nd-order system with only two delay units.

b) Determine system function, $H(z)$, of the above structure? Plot pole-zero diagram and indicate if this system is stable or not? [4pts]

$$w_1(n) = x(n) + 0.24y(n)$$

$$w_2(n) = 2x(n) - 0.2y(n) + w_1(n-1)$$

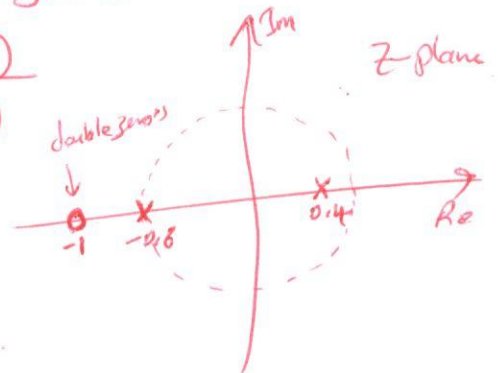
$$y(n) = x(n) + w_2(n-1)$$

$$y(n) = x(n) + 2x(n-1) - 0.2y(n-1) + w_1(n-2)$$

$$y(n) = x(n) + 2x(n-1) - 0.2y(n-1) + x(n-2) + 0.24y(n-2)$$

$$y(n) = x(n) + 2x(n-1) + x(n-2) - 0.2y(n-1) + 0.24y(n-2)$$

$$H(z) = \frac{1 + 2z^{-1} + z^{-2}}{1 + 0.2z^{-1} - 0.24z^{-2}} = \frac{(1+z^{-1})(1+z^{-1})}{(1+0.6z^{-1})(1-0.4z^{-1})}$$



ROC: $|z| > 0.6 \Rightarrow$ Unit circle inside.

\Rightarrow so, it is stable system.

c) Draw the following realization structure forms of the above filter: [6pts]

i) Parallel form using first order filters.

ii) Cascade form.

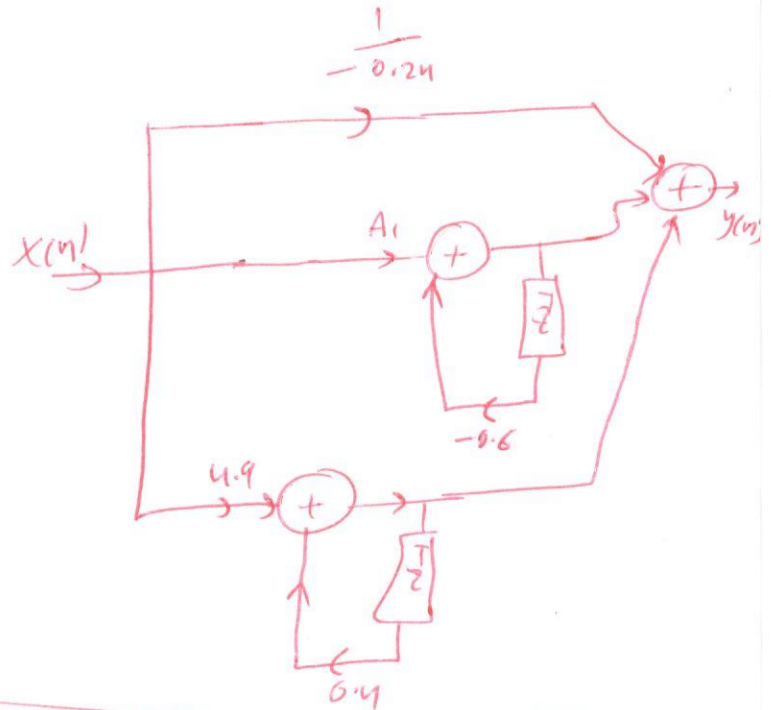
iii) Transposed direct form II.

$$i) H(z) = \frac{1 + 2z^{-1} + z^{-2}}{(1 + 0.6z^{-1})(1 - 0.4z^{-1})} = B_0 + \frac{A_1}{1 + 0.6z^{-1}} + \frac{A_2}{1 - 0.4z^{-1}}$$


$$B_0 = \frac{-1}{0.24}$$

$$A_1 = H(z)(1 + 0.6z^{-1}) \Big|_{z=-0.6} = \frac{64}{3}$$

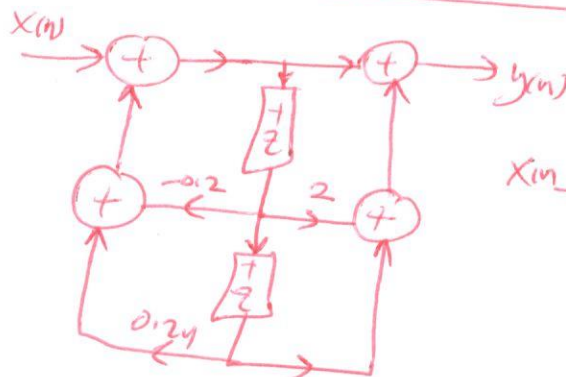
$$A_2 = H(z)(1 - 0.4z^{-1}) \Big|_{z=0.4} = 4.9$$



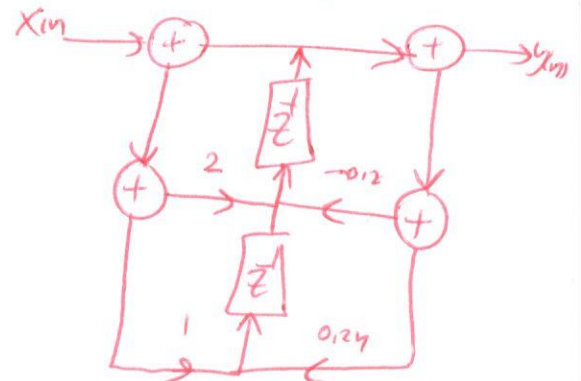
$$ii) H(z) = \left(\frac{1 + z^{-1}}{1 + 0.6z^{-1}} \right) \cdot \left(\frac{1 + z^{-1}}{1 - 0.4z^{-1}} \right)$$



iii) Direct form II



Transposed D.F. II



Question 3: [9pts]

a) Prove the convolution theorem of Z-transform, i.e. $Z\{x(n)*y(n)\} = X(z)Y(z)$. [3pts]

$$\begin{aligned} \text{Set } y(n) &= x(n) * h(n) \\ &= \sum_{k=-\infty}^{\infty} x(k)h(n-k) \end{aligned}$$

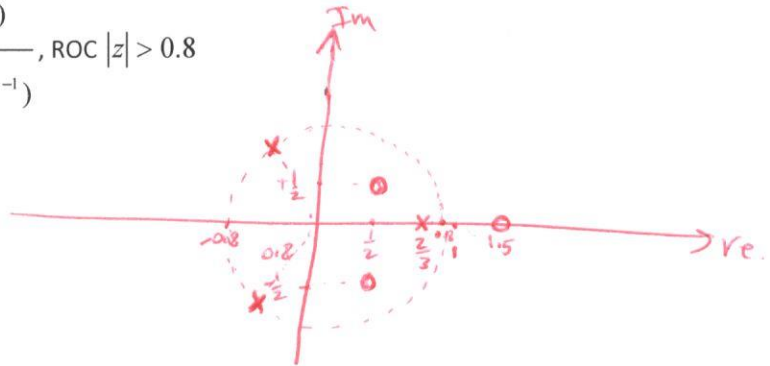
$$\begin{aligned} Y(z) &= \sum_{n=-\infty}^{\infty} y(n)z^{-n} = \sum_{n=-\infty}^{\infty} \left(\sum_{k=-\infty}^{\infty} x(k)h(n-k) \right) z^{-n} = \sum_{k=-\infty}^{\infty} x(k) \sum_{n=-\infty}^{\infty} h(n-k)z^{-n} \\ \text{Set } r &= n-k \\ &= \sum_{k=-\infty}^{\infty} x(k) \sum_{r=-\infty}^{\infty} h(r)z^{-r-k} = \sum_{k=-\infty}^{\infty} x(k)z^{-k} \sum_{r=-\infty}^{\infty} h(r)z^{-r} = X(z) \cdot H(z). \end{aligned}$$

b) Consider the following transfer function of an LTI system.

$$H(z) = \frac{(1-1.5z^{-1})(1-\frac{1+j}{2}z^{-1})(1-\frac{1-j}{2}z^{-1})}{(1-0.8e^{j\frac{2\pi}{3}}z^{-1})(1-0.8e^{-j\frac{2\pi}{3}}z^{-1})(1-\frac{2}{3}z^{-1})}, \text{ ROC } |z| > 0.8$$

i) Plot the pole-zero diagram of this system. [2pts]

$$\begin{aligned} \text{Zeros: } z &= 1.5, \frac{1+j}{2}, \frac{1-j}{2} \\ \text{Poles: } &0.8e^{j\frac{2\pi}{3}}, 0.8e^{-j\frac{2\pi}{3}}, \frac{2}{3} \end{aligned}$$

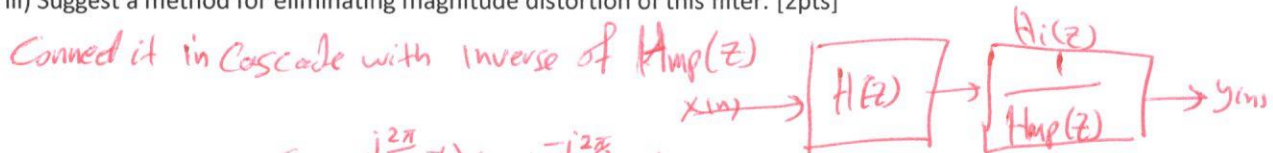


ii) Express $H(z)$ as a cascade of an all-pass filter and a minimum-phase filter. [2pts]

$$H(z) = H_{AP}(z) \cdot H_{MP}(z)$$

$$H_{AP}(z) = \frac{z^{-1} - \frac{2}{3}}{1 - \frac{2}{3}z^{-1}}, \quad H_{MP}(z) = -1.5 \frac{(1 - \frac{1+j}{2}z^{-1})(1 - \frac{1-j}{2}z^{-1})}{(1 - 0.8e^{j\frac{2\pi}{3}}z^{-1})(1 - 0.8e^{-j\frac{2\pi}{3}}z^{-1})}$$

iii) Suggest a method for eliminating magnitude distortion of this filter. [2pts]



$$H_i(z) = \frac{2}{3} \frac{(1 - 0.8e^{j\frac{2\pi}{3}}z^{-1})(1 - 0.8e^{-j\frac{2\pi}{3}}z^{-1})}{(1 - \frac{1+j}{2}z^{-1})(1 - \frac{1-j}{2}z^{-1})}, \quad |z| > \frac{1}{\sqrt{2}}$$

ROC.

Bonus: MATLAB [5pts]

a) Write a MATLAB code for generating a discrete-time signal of length 1 second and sampling frequency 8KHz. The signal consists of the following two frequencies 200Hz and 3KHz with unity amplitude of each one. Display this signal on a figure. [1pt]

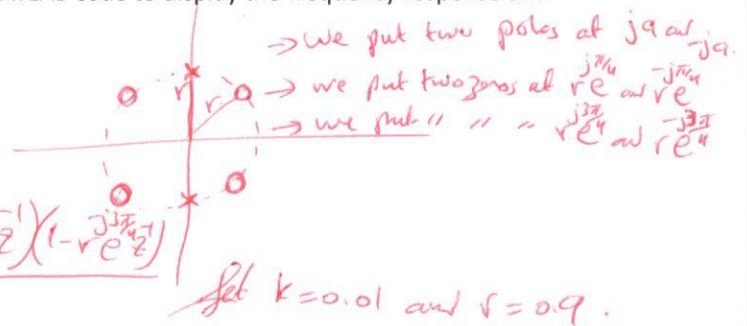
$$\begin{aligned}
 F_s &= 8000; \\
 t &= 0 : 1/F_s : 1; \\
 A &= [1 \ 1]; \\
 F &= [200 \ 3000]; \\
 X &= A * \cos(2 * \pi * F * t); \\
 \text{stem}(t, X);
 \end{aligned}$$

b) Suggest a filter for removing 200Hz and keep 3KHz? Write MATLAB code to display the frequency response and phase response of your filter [2pts].

Passing only 2kHz and remove 1kHz and 3kHz

$$\begin{aligned}
 1000\text{Hz} &\Rightarrow \omega_1 = \frac{2\pi(1000)}{8000} = 0.25\pi \\
 2000\text{Hz} &\Rightarrow \omega_2 = 0.5\pi \\
 3000\text{Hz} &\Rightarrow \omega_3 = 0.75\pi
 \end{aligned}$$

$$H(z) = k \frac{(1 - re^{j\frac{3\pi}{4}}z^{-1})(1 - re^{j\frac{3\pi}{4}}z^{-1})(1 - re^{j\frac{3\pi}{4}}z^{-1})(1 - re^{j\frac{3\pi}{4}}z^{-1})}{(1 - re^{j\frac{\pi}{4}}z^{-1})(1 - re^{-j\frac{\pi}{4}}z^{-1})}$$



~~Plot(b, a)~~; Simplify it as $\frac{p(z^{-1})}{q(z^{-1})}$

c) Write a MATLAB code for implementing your filter in part b) above and apply it on the generated signal in part a) above. [1pt]

$$\begin{aligned}
 y &= \text{filter}(b, a, x); \\
 \text{stem}(t, y);
 \end{aligned}$$

coef. of p(z) →
coef. of q(z) →