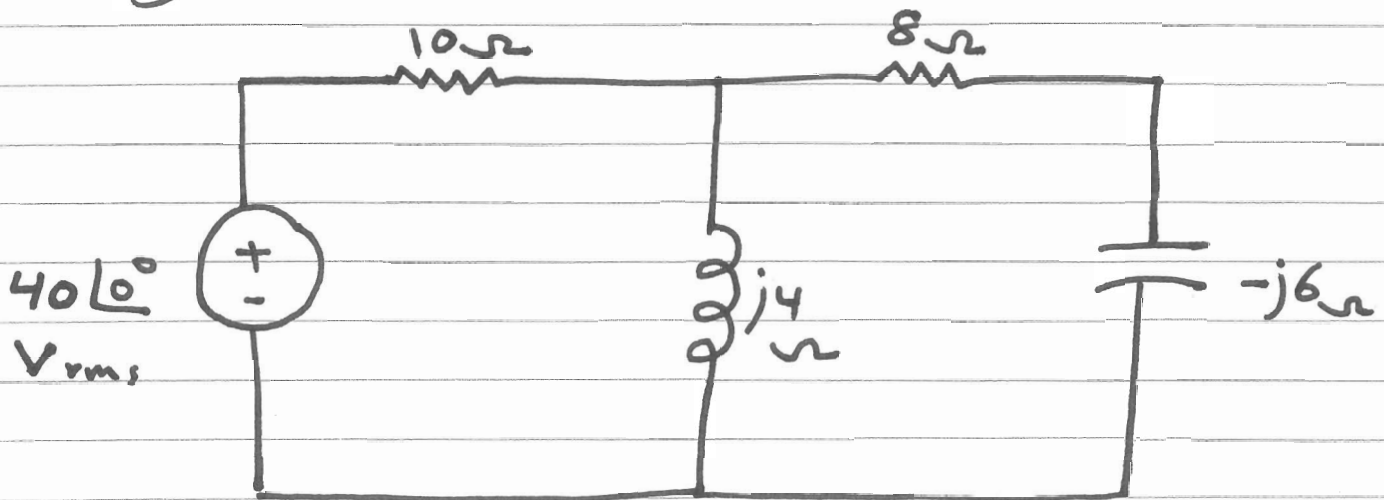


## Example

Calculate the power factor seen by the source and the average power supplied by the source.



$$Z = 10 + j4 \parallel (8 - j6)$$

$$Z = 12.69 \angle 20.62^\circ \Omega$$

$$\vec{I}_s = \frac{40\angle 0^\circ}{Z} = 3.152 \angle -20.62^\circ \text{ A}_{rms}$$

$$\Theta_s = 0^\circ, \quad \Phi_i = -20.62^\circ$$

$$PF = \cos(\Theta_s - \Phi_i)$$

$$PF = \cos(20.62^\circ)$$

$$PF = 0.936 \text{ Lagging}$$

The average power supply by the source is equal to the average power absorbed by the circuit

$$P_{av} = V_{rms} I_{rms} \cos(\theta_v - \phi_i)$$

$$V_{rms} = 40 \text{ V}_{rms}$$

$$I_{rms} = 3.152 \text{ A}_{rms}$$

$$\theta_v = 0^\circ$$

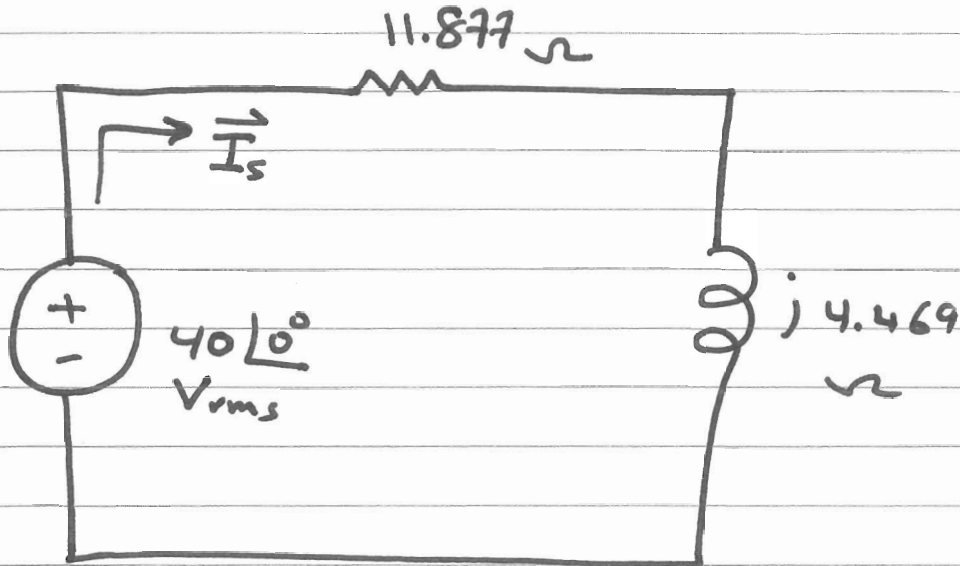
$$\phi_i = -20.62^\circ$$

$$\therefore P_{av} = (40)(3.152) \cos(0 - (-20.62^\circ))$$

$$\therefore P_{av} = 118 \text{ Watt}$$

$$Z = 12.69 \angle 20.62^\circ \Omega$$

$$Z = 11.877 + j 4.469 \Omega$$



$$\therefore P_{av} = I_{rms}^2 R$$

$$P_{av} = (3.152)^2 (11.877)$$

$$P_{av} = 118 \text{ W}$$

$$\text{also } P_{av} = P_{av} + P_{av} + P_{av} + P_{av}$$

$10\Omega \quad 8\Omega \quad -j6 \quad j4$

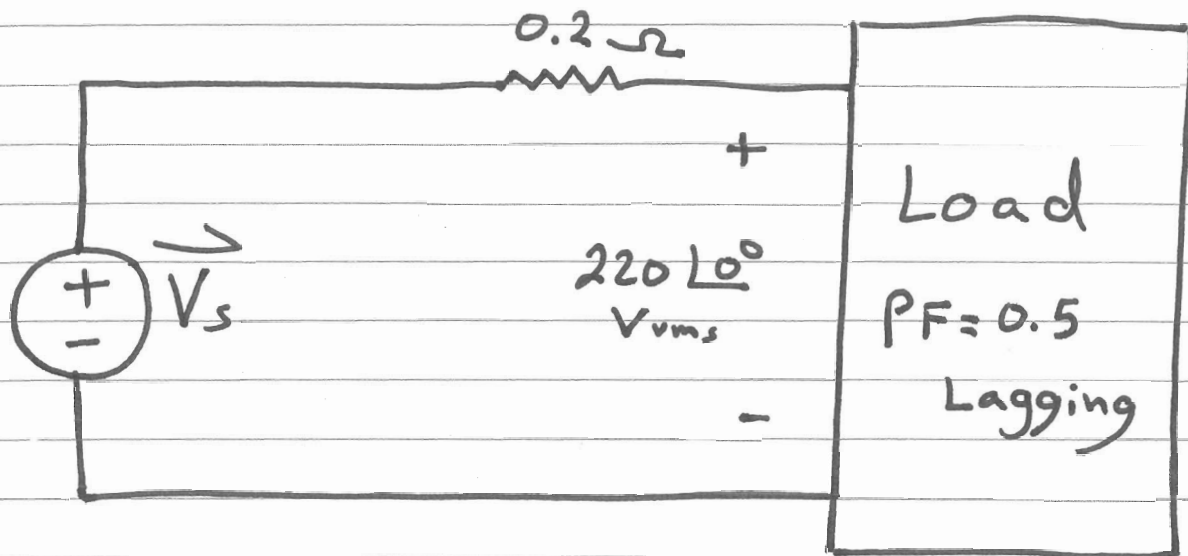
$$P_{av} = P_{av} + P_{av}$$

$10\Omega \quad 8\Omega$

## Example

An industrial Load Consumer 11KW at 0.5 PF Lagging from a 220V rms Line. The transmission Line resistance from the power Company to the plant is  $0.2 \Omega$ .

- 1) Determine the average power that must be supplied by the power Company
- 2) Repeat ① if the Power factor is changed to unity.



$$P_{av_L} = V_{rms} \cdot I_{rms} \cdot PF$$

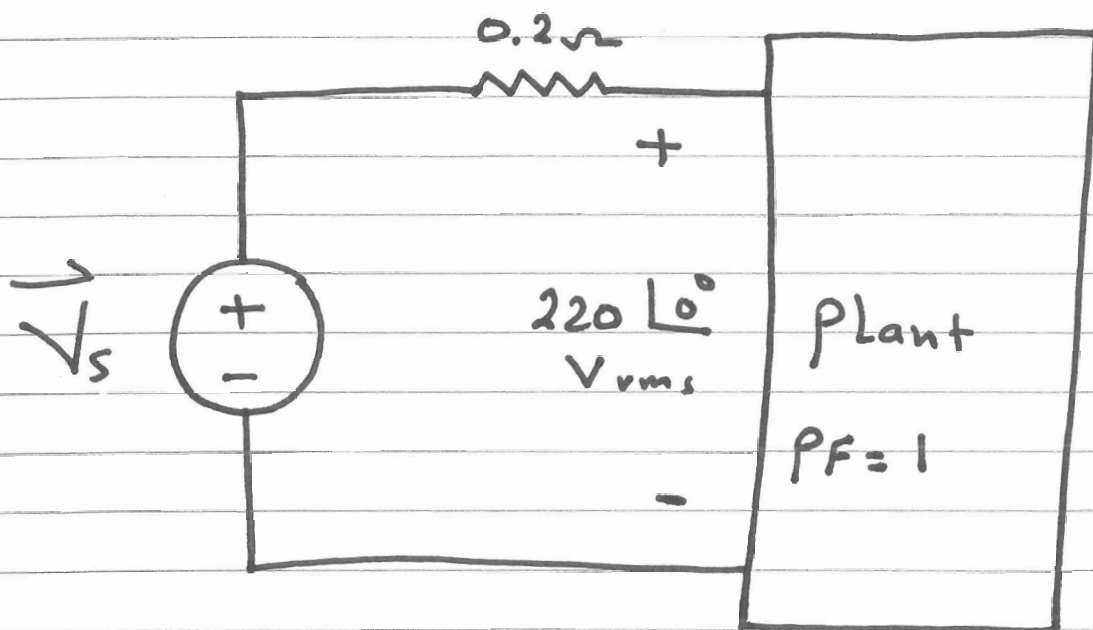
$$\therefore I_{rms} = \frac{P_{av_L}}{V_{rms} \cdot PF}$$

$$I_{rms} = \frac{11 \text{ kW}}{(220)(0.5)} = 100 \text{ A}_{rms}$$

$$P_{Loss} = (I_{rms}^2) \cdot (0.2) = 2 \text{ kW}$$

$$\therefore P_{av_{sup}} = P_{av_L} + P_{av_{Loss}}$$

$$P_{av_{sup}} = 13 \text{ kW}$$



$$P_{\text{av load}} = V_{\text{rms}} \cdot I_{\text{rms}} \cdot \text{PF}$$

$$\therefore I_{\text{rms}} = \frac{P_{\text{av}}}{V_{\text{rms}} \cdot \text{PF}} = 50 \text{ A}_{\text{rms}}$$

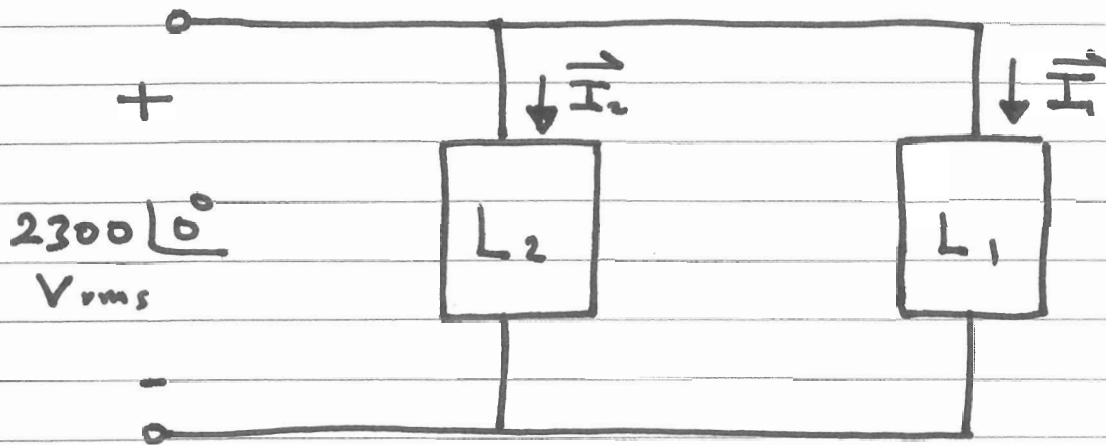
$$P_{\text{loss}} = I_{\text{rms}}^2 \cdot R = (50)^2 \cdot (0.2) = 0.5 \text{ kW}$$

$$\therefore P_{\text{av sup}} = 0.5 \text{ kW} + 11 \text{ kW}$$

$$P_{\text{av sup}} = 11.5 \text{ kW}$$

## Example

Find the power factor of the two loads



Load 1 : 10 kW , 0.9 Lagging PF

Load 2 : 5 kW , 0.95 Leading PF

$$\vec{I}_1 = \frac{10,000}{(2300)(0.9)} \angle -\cos^{-1} 0.9$$

$$\vec{I}_1 = 4.83 \angle -25.84^\circ \text{ A}_{rms}$$

$$\vec{I}_2 = \frac{5000}{(2300)(0.95)} \angle +\cos^{-1} 0.95$$

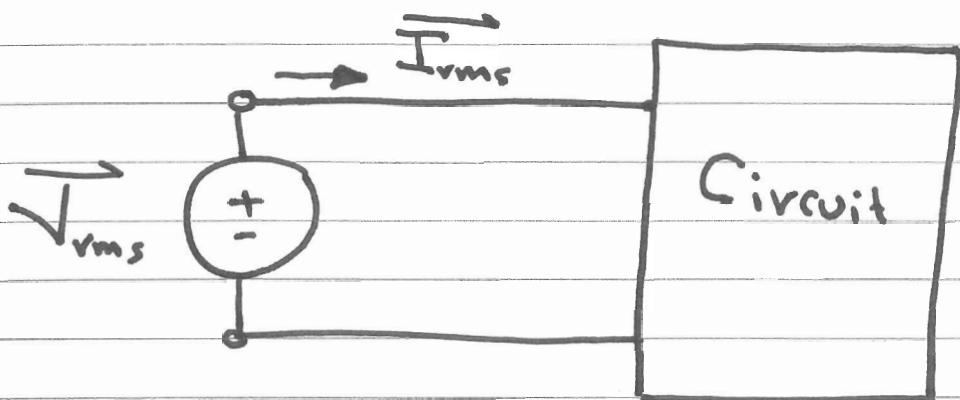
$$\vec{I}_2 = 2.288 \angle 18.195^\circ \text{ A}_{rms}$$

$$\vec{I}_s = \vec{I}_1 + \vec{I}_2 = 6.78 \angle -12^\circ \text{ A}_{rms}$$

$$PF = \cos(\theta_v - \theta_i) = \cos(0 - (-12^\circ))$$

$$PF = 0.978 \text{ Lagging}$$

# Complex Power



$$\vec{V}_{rms} = V_{rms} \angle \theta_v$$

$$\vec{I}_{rms} = I_{rms} \angle \phi_i$$

$\vec{S} \equiv$  Complex power

$$\vec{S} = \vec{V}_{rms} \cdot \vec{I}_{rms}^*$$

$$\vec{S} = V_{rms} I_{rms} \angle \theta_v - \phi_i$$

$$\vec{S} = V_{rms} I_{rms} \cos(\theta_v - \phi_i)$$

$$+ j V_{rms} I_{rms} \sin(\theta_v - \phi_i)$$

$$\vec{S} = P_{av} + j Q$$



$$\vec{S} = P_{av} + jQ$$

$P_{av}$   $\equiv$  Average power in Watt

$Q$   $\equiv$  Reactive power in VAR

$$\therefore P_{av} = \text{Real}[\vec{S}]$$

$$Q = \text{Imaginary}[\vec{S}]$$

$$Q = V_{rms} I_{rms} \sin(\theta_v - \phi_i)$$

1) For pure resistance

$$\theta_v - \phi_i = 0$$

$$\therefore Q_R = 0$$

2) For pure inductance

$$\theta_v - \phi_i = +90^\circ$$

$$\therefore Q_L = V_{rms} I_{rms}$$

$$V_{rms} = \omega L I_{rms}$$

$$\therefore Q_L = \omega L I_{rms}^2 = \frac{V_{rms}^2}{\omega L}$$

3) For pure Capacitance

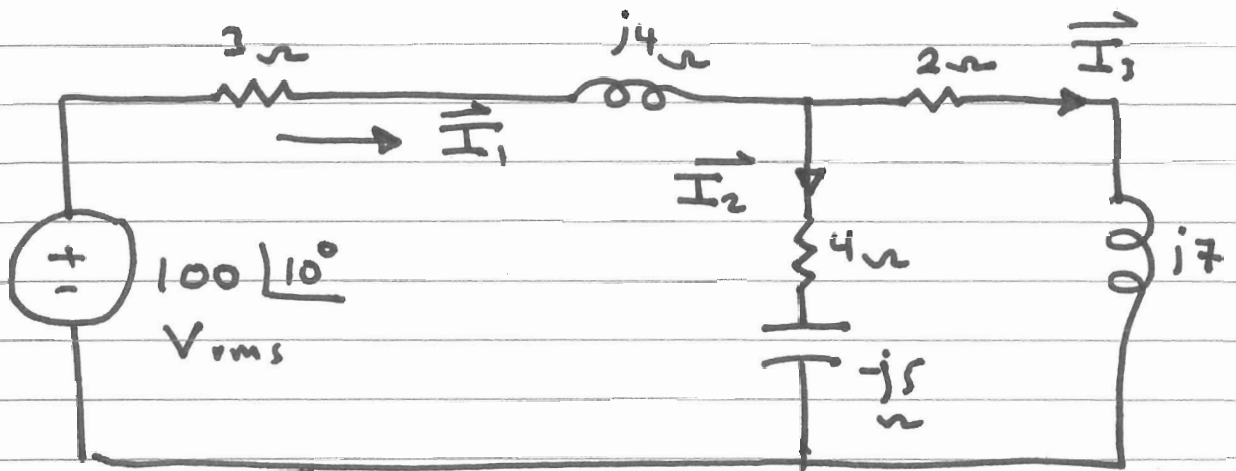
$$\theta_v - \phi_i = -90^\circ$$

$$Q_c = -V_{rms} I_{rms}$$

$$I_{rms} = \omega C V_{rms}$$

$$\therefore Q_c = - \frac{I_{rms}^2}{\omega C} = - \omega C V_{rms}^2$$

What are the VARs Consumed by the Circuit



$$Q = V_{rms} I_{rms} \sin(\theta_v - \phi_i)$$

$$\vec{I}_1 = \frac{\vec{V}_s}{Z}$$

$$Z = (2 + j7) \parallel (4 - j5) + 3 + j4$$

$$Z = 10.35 + j4.55 = 11.3 \angle 23.7^\circ \Omega$$

$$\therefore \vec{I}_1 = \frac{100 \angle 10^\circ}{11.3 \angle 23.7^\circ} = 8.84 \angle -13.7^\circ \text{ A}_{rms}$$

$$\therefore Q = (100)(8.84) \sin(10 - (-13.7^\circ))$$

$$\therefore Q = 355 \text{ VARs}$$

$$I_2 = 10.2 \text{ A}_{rms}$$

$$I_3 = 8.95 \text{ A}_{rms}$$

$$P_{av} = V_{rms} I_{rms} \cos(\theta_v - \phi_i)$$

$$Q = V_{rms} I_{rms} \sin(\theta_v - \phi_i)$$

$$\frac{Q}{P_{av}} = \tan(\theta_v - \phi_i)$$

$$\therefore Q = P_{av} \tan(\theta_v - \phi_i)$$

$$Q = P_{av} \tan[\cos^{-1}(PF)]$$

$$\vec{S} = P_{av} + jQ$$

$$|\vec{S}| = \sqrt{P_{av}^2 + Q^2} \quad \left| \tan^{-1} \frac{Q}{P_{av}} \right.$$

$$|\vec{S}| = V_{rms} I_{rms} \quad \left| \theta_v - \phi_i \right.$$

$$\therefore P_a = |\vec{S}| = \sqrt{P_{av}^2 + Q^2}$$

$$\theta_v - \phi_i = \tan^{-1} \frac{Q}{P_{av}}$$

$$\Theta_{V-\Phi_i} = \tan^{-1} \frac{Q}{P_{av}}$$

To increase P.F, we need to decrease Q

$\therefore$  For inductive circuit, we add a Capacitor in parallel to increase the power factor

$$P_{av_T} = P_{av_1} + P_{av_2} + \dots + P_{av_n}$$

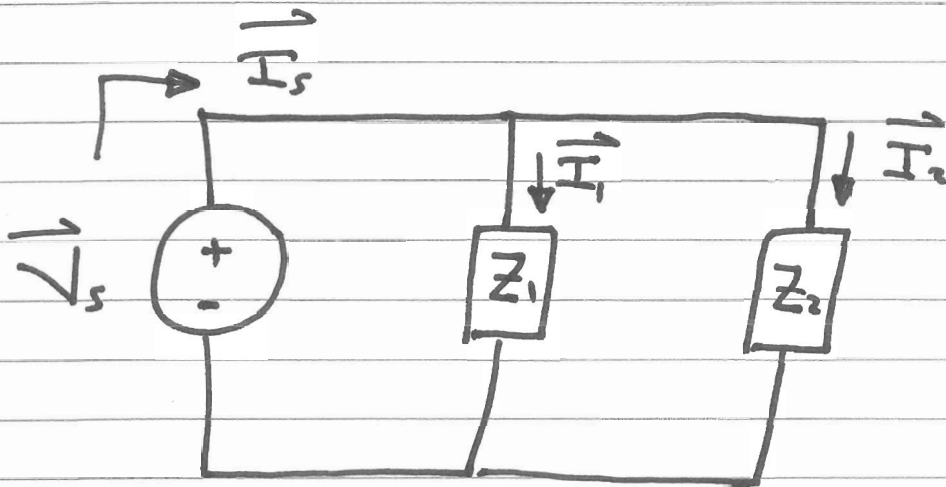
$$Q_T = Q_1 + Q_2 + \dots + Q_n$$

$$\vec{S}_T = P_{av_T} + j Q_T$$

$$\vec{S}_T = \vec{S}_1 + \vec{S}_2 + \dots + \vec{S}_n$$

# Conservation of Ac Power

The Complex, real, and reactive powers of the Sources equal the respective Sum of the Complex, real, and reactive powers of the individual Loads.



$$\vec{P}_{\text{Source}} = \vec{V}_s \cdot \vec{I}_s^*$$

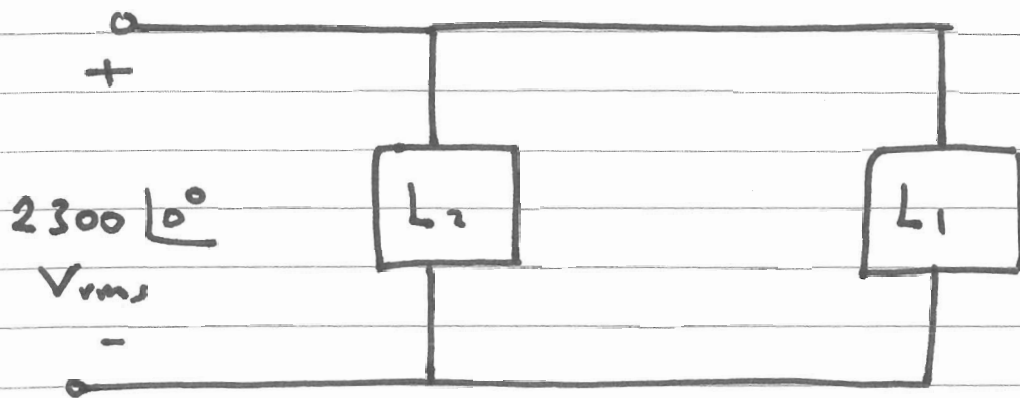
$$\vec{P}_{\text{Source}} = \vec{V}_s \cdot (\vec{I}_1^* + \vec{I}_2^*)$$

$$\vec{P}_{\text{Source}} = \vec{V}_s \cdot \vec{I}_1^* + \vec{V}_s \cdot \vec{I}_2^*$$

$$\vec{P}_{\text{Source}} = \vec{P}_1 + \vec{P}_2$$

The Same results can be obtained for a series connection.

Find the power factor of the two Loads



Load 1 : 10 kW , 0.9 Lagging P.F

Load 2 : 5 kW , 0.95 Leading P.F

$$\vec{S}_1 = P_{av1} + j Q_1$$

$$Q_1 = P_{av1} \tan [\cos^{-1}(\text{P.F.}_1)] = 4843 \text{ VARs}$$

$$\therefore \vec{S}_1 = 10000 + j 4843$$

$$\vec{S}_2 = P_{av2} + j Q_2$$

$$Q_2 = - P_{av2} \tan [\cos^{-1}(\text{P.F.}_2)]$$

$$Q_2 = - 1643 \text{ VARs}$$

$$\therefore \vec{S}_2 = 5000 - j 1643$$



$$\vec{S}_T = \vec{S}_1 + \vec{S}_2$$

$$\vec{S}_T = 15000 + j 3200$$

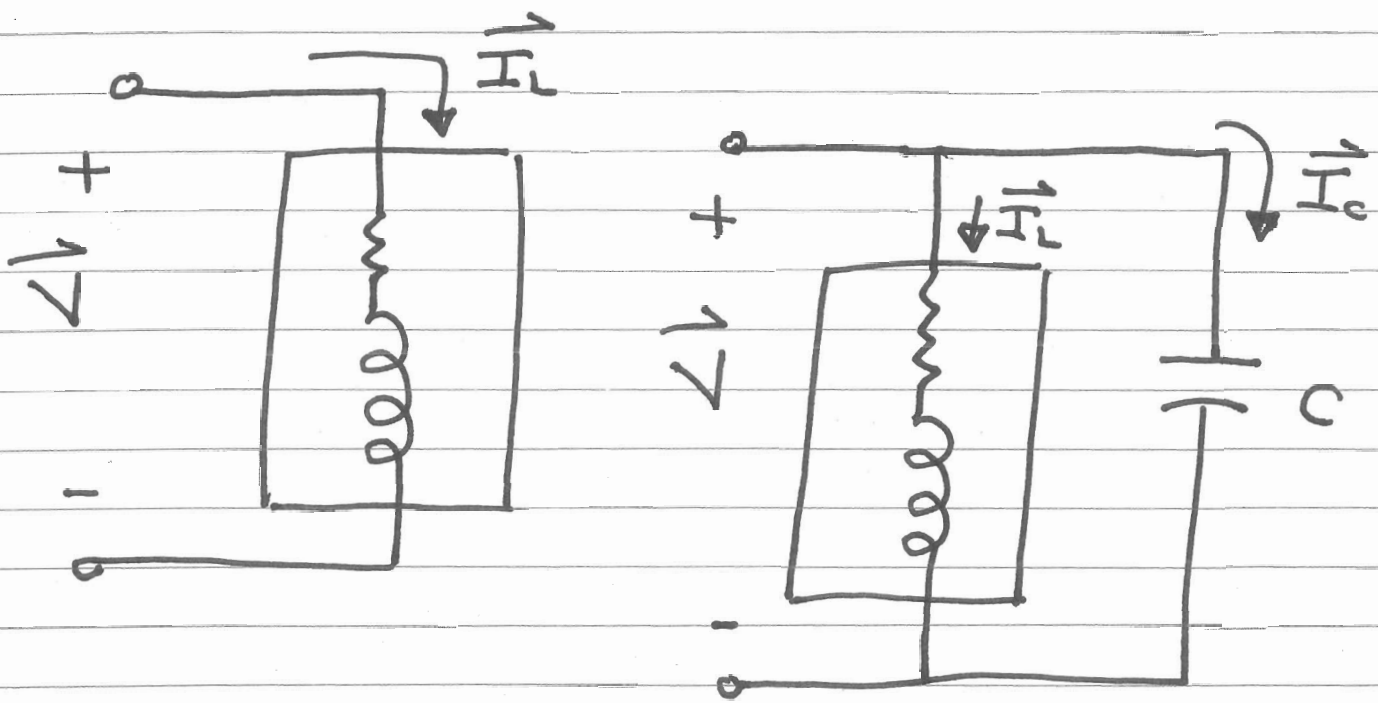
$$\vec{S}_T = 15337.5 \angle 12.02^\circ \quad \text{VA}$$

$$\text{P.F.} = \cos(12.02)$$

$$\text{P.F.} = 0.978 \text{ Lagging}$$

# Power Factor Correction

Power factor Correction is the process of increasing the power factor without altering the voltage or current to the original load.



Power factor Correction is necessary for Economic Reason.

$$PF = \cos(\theta_v - \phi_i)$$

For R

$$P.F = 1$$

$$Q_R = 0$$

∴ To improve the power factor  
we must decrease the Reactive  
power

∴ For inductive circuit, we add  
a capacitor in parallel to the  
load.

$$Q_c = Q_{\text{Final}} - Q_{\text{init}}$$

$$C = \frac{-Q_c}{\omega V_{\text{rms}}^2}$$

## Example

A certain industrial plant Consumer  
1 MW at 0.7 Lagging power factor  
and a 2300 V rms.

What is the minimum Capacitor required  
to improve the power factor to  
0.9 Lagging.  $\omega = 377 \text{ rad/s}$

$$Q_{ini} = P_{av} \tan [\cos^{-1} PF_1]$$

$$Q_{ini} = 1 \text{ M} \tan [\cos^{-1} 0.7]$$

$$Q_{ini} = 1.02 \text{ MVARs}$$

$$Q_{Fin} = P_{av} \tan [\cos^{-1} PF_2]$$

$$Q_{Fin} = P_{av} \tan [\cos^{-1} 0.9]$$

$$Q_{Fin} = 0.484 \text{ MVARs}$$

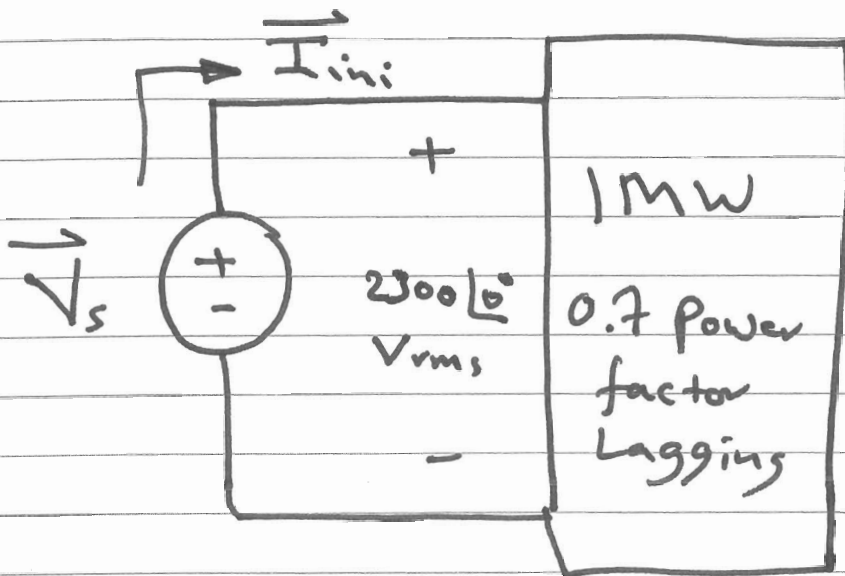
$$Q_c = Q_{Fin} - Q_{ini}$$

$$Q_c = -0.536 \text{ MVARs}$$

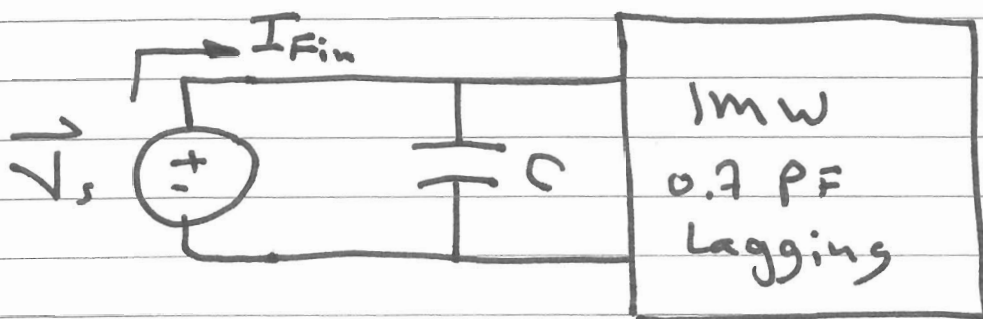
$$Q_c = - \frac{V_{rms}^2}{X_c}$$

$$Q_c = - \omega C V_{rms}^2$$

$$\therefore C = - \frac{Q_c}{\omega V_{rms}^2} = 269 \mu F$$

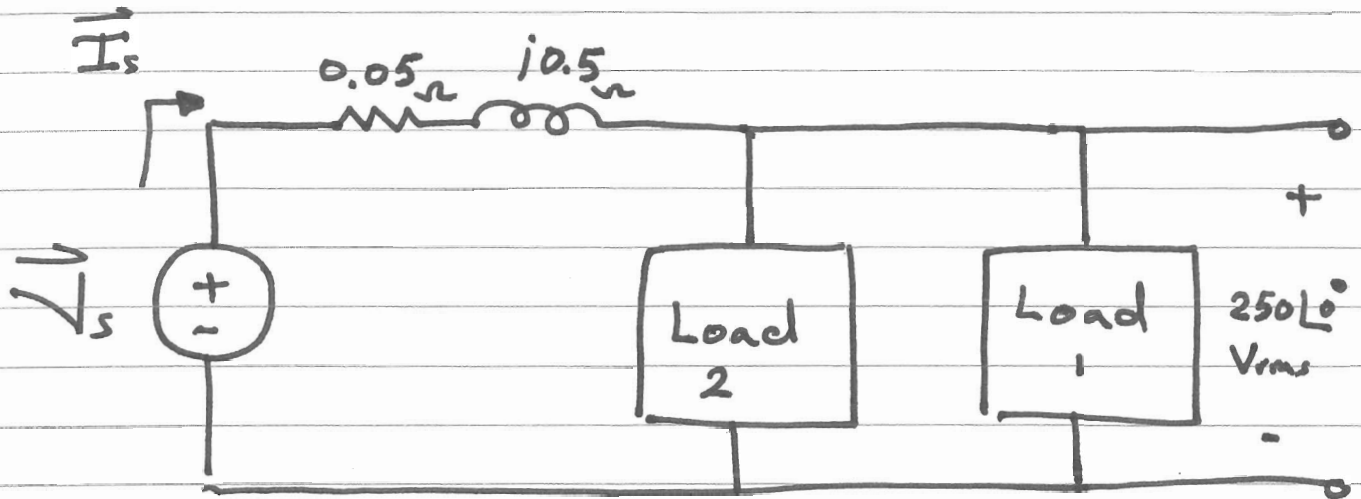


$$I_{ini} = \frac{P_{av}}{(V_{rms})(PF_1)} = 621 A_{rms}$$



$$I_{Fin} = \frac{P_{av}}{(V_{rms})(PF_2)} = 483 A_{rms}$$

## Example



Load 1 : 8 KW ; 0.8 PF Leading

Load 2 : 20 KVA ; 0.6 PF Lagging

- 1) Determine the power factor of the two loads in parallel
- 2) Determine the apparent power required to supply the loads; the magnitude of the current  $I_s$ ; the average power loss in the transmission line
- 3) Compute the value of the capacitor that would correct the power factor to 1 if

Placed in parallel with the two loads

$$\omega = 377 \text{ rad/s}$$

4) Repeat step 2

---

Load 1 : 8KW ; 0.8 PF<sub>1</sub> leading

Load 2 : 20KVA ; 0.6 PF<sub>2</sub> Lagging

$$P_{av_1} = 8000 \text{ W}$$

$$\therefore Q_1 = - P_{av_1} \tan[\cos^{-1}(PF_1)] = -6000 \text{ VARs}$$

$$\therefore \vec{S}_1 = P_{av_1} + j Q_1$$

$$\vec{S}_1 = 8000 - j 6000 \quad \text{VA}$$

$$P_{a_2} = 20000 \text{ VA} ; PF_2 = 0.6 \text{ Lagging}$$

$$\therefore P_{av_2} = P_a \cdot PF_2 = 12000 \text{ W}$$

$$Q_2 = P_{av_2} \tan[\cos^{-1}(PF_2)] = +16000 \text{ VARs}$$

$$\therefore \vec{S}_2 = P_{av_2} + j Q_2$$

$$\vec{S}_2 = 12000 + j 16000 \quad \text{VA}$$

$$\vec{S}_T = \vec{S}_1 + \vec{S}_2$$

$$\vec{S}_T = 20000 + j 10000 \quad \text{VA}$$

$$\vec{S}_T = 22360 \angle 26.565^\circ \quad \text{VA}$$

$$\therefore PF = \cos(26.565) = 0.8944 \text{ Lagging}$$

Loads



$$\vec{S}_T = \vec{V}_{rms} \vec{I}_s^*$$

$$\therefore \vec{I}_s^* = \frac{\vec{S}_T}{\vec{V}_{rms}} = \frac{22360 \angle 26.565^\circ}{250}$$

$$\therefore \vec{I}_s = 89.44 \angle -26.565^\circ \text{ A}_{rms}$$

$$\text{Since } \vec{S}_T = 22360 \angle 26.565^\circ$$

$$\therefore P_a = |S_T| = 22360 \text{ VA}$$

$$P_{\text{av Loss}} = |\vec{I}_s|^2 \cdot (0.05)$$

$$= 400 \text{ W}$$

$$3) \text{ Since } \vec{S}_T = 20000 + j10000$$

$$\therefore Q_{ini} = 10000 \text{ VARS}$$

$$Q_{Fin} = 0$$

$$\therefore Q_c = Q_{Fin} - Q_{ini} = -10000 \text{ VARS}$$

$$\therefore C = \frac{Q_c}{\omega V_{rms}^2} = 424.4 \text{ MF}$$

4) Since  $Q_{Fin} = 0$

$$\therefore \vec{S}_F = P_{av} = 20000 \text{ VA}$$

$$\therefore P_a = P_{av} = 20000 \text{ VA}$$

$$\therefore \vec{S}_F = 20000 \angle 0^\circ \text{ VA}$$

$$\vec{S}_F = \vec{V}_{rms} \cdot \vec{I}_s^*$$

$$\therefore \vec{I}_s^* = \frac{20000 \angle 0^\circ}{250 \angle 0^\circ} = 80 \angle 0^\circ \text{ A}_{rms}$$

$$\therefore \vec{I}_s = 80 \angle 0^\circ \text{ A}_{rms}$$

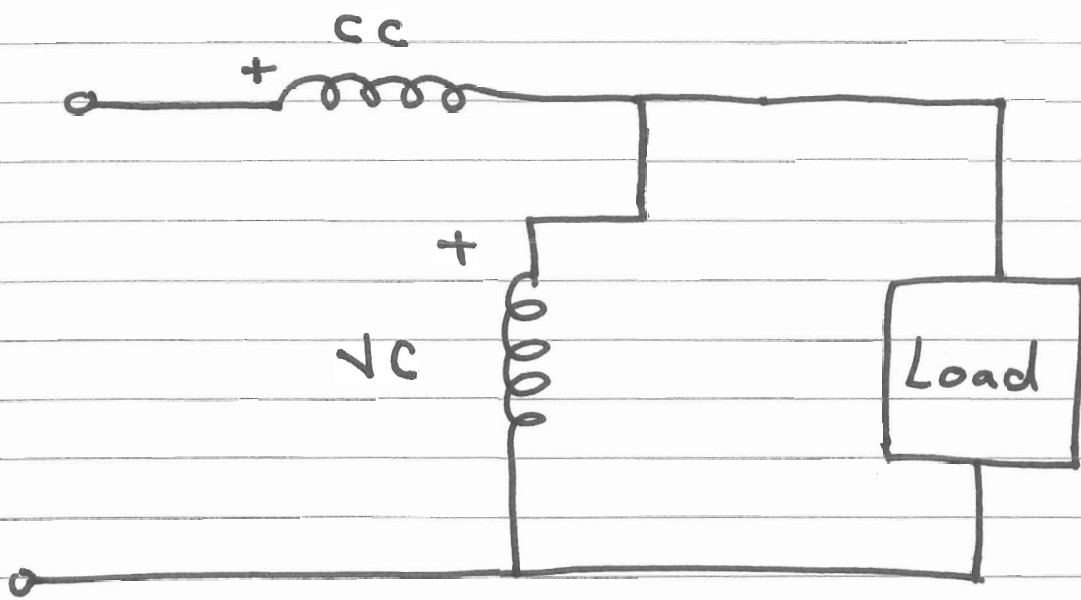
$$P_{Loss} = |I_s|^2 \cdot (0.05)$$

$$P_{Loss} = 320 \text{ W}$$

# Power Measurement

Wattmeter is the instrument for measuring the average power

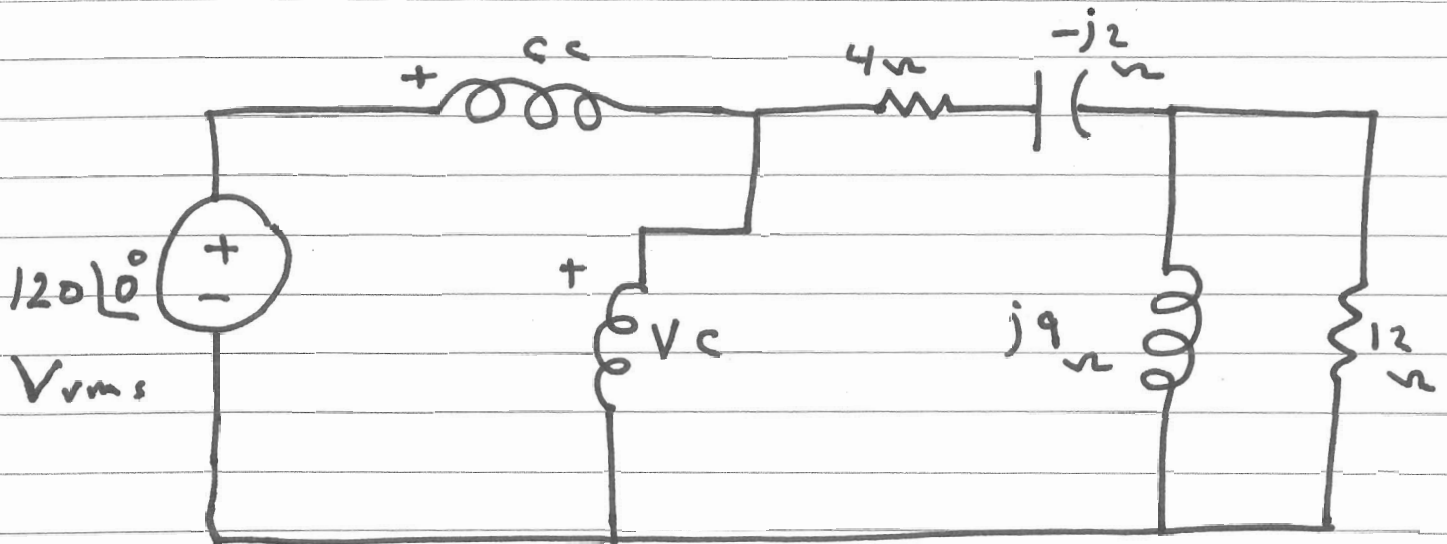
Two coils are used, the high impedance Voltage Coil and the Low impedance Current Coil.



$$P = V_{rms} I_{rms} \cos(\theta_v - \phi_i)$$

## Example

Find the Wattmeter reading



$$Z = 4 - j2 + (j9 \parallel 12)$$

$$Z = 9.13 \angle 24.32^\circ$$

$$\vec{I} = \frac{120 \angle 0^\circ}{9.13 \angle 24.32^\circ} = 13.14 \angle -24.32^\circ \text{ A}_{\text{rms}}$$

$$P = (120)(13.14) \cos(0 + 24.32^\circ)$$

$$P = 1436.9 \text{ W}$$