

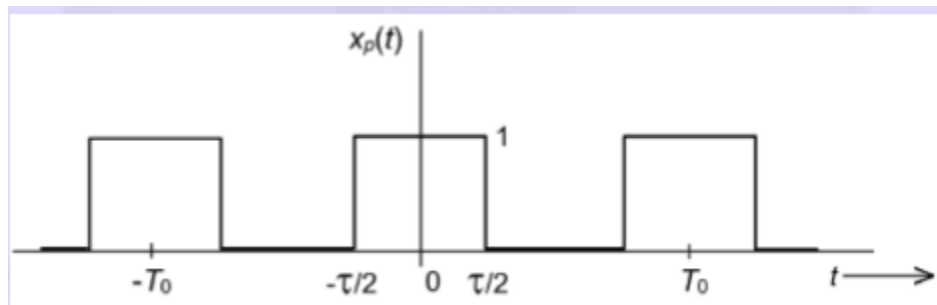
Problem Set 1

Signals and Systems

1. For the periodic signal,
 a. show that

$$x_n = \left(\frac{\tau}{T_0} \right) \text{sinc}(nf_0 \tau)$$

- b. Find the average power in the signal
 c. Find the discrete power spectral density
 d. Find the fraction of the total power contained in the first five harmonics assuming $\tau = T_0/4$.
 e. Use matlab to plot both $x_p(t)$ and the first five harmonics assuming $\tau = T_0/4$.



2. A. Use the duality property, to find the Fourier transform of

$$z(t) = A \text{sinc } 2Wt$$

- B. Find the total energy in $z(t)$.

3. Make use of the result of Problem 2 to find the energy in the signal

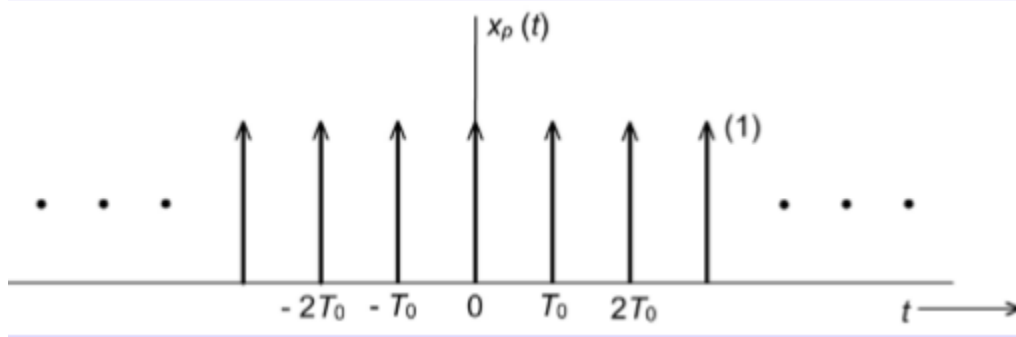
$$x(t) = 2AW \text{sinc } (2Wt).$$

4. Evaluate the integrals:

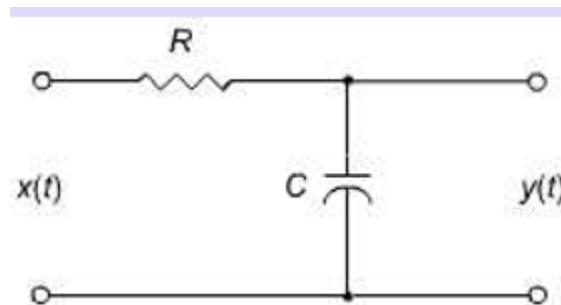
(a) $\int_{-4}^4 t^3 \delta(t - 5) dt$

(b) $\int_{4.9}^{5.1} t^3 \delta(t - 5) dt$

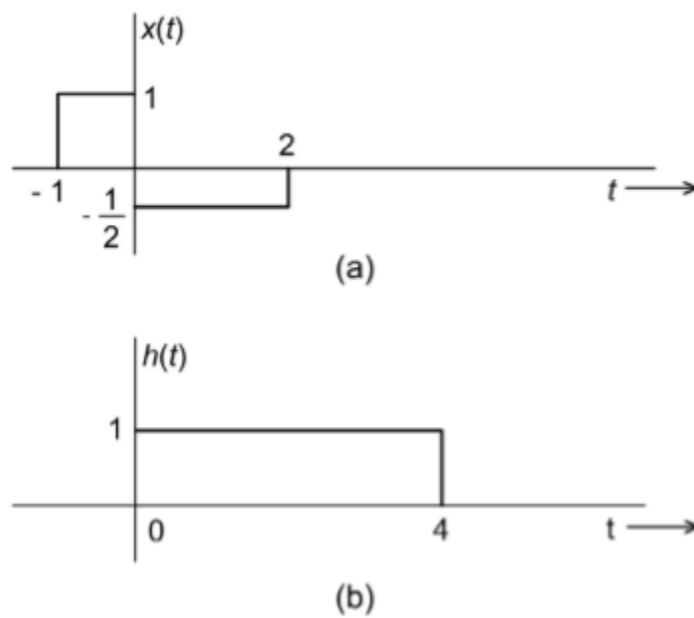
5. Find the Fourier transform of the uniform impulse train



6. A. Find the frequency response $H(f)$ and impulse response $h(t)$ of the circuit:



- B. Find the 3-dB bandwidth of the circuit
7. The input $x(t)$ and the impulse response $h(t)$ of a LTI system are as shown in the figure below, find the output $y(t)$



- Find the Fourier transform of $x(t)$ and $h(t)$
- Use the convolution integral to find $y(t)$

- c. Find the equivalent time duration of $x(t)$
 d. Find the equivalent rectangular bandwidth of $x(t)$
 8. The input $x(t)$ and the impulse response $h(t)$ of a LTI system are

$$x(t) = \begin{cases} e^{-\alpha t}, & t \geq 0 \\ 0, & \text{otherwise} \end{cases}$$

$$h(t) = \begin{cases} e^{-\beta t}, & t \geq 0 \\ 0, & \text{otherwise} \end{cases}$$

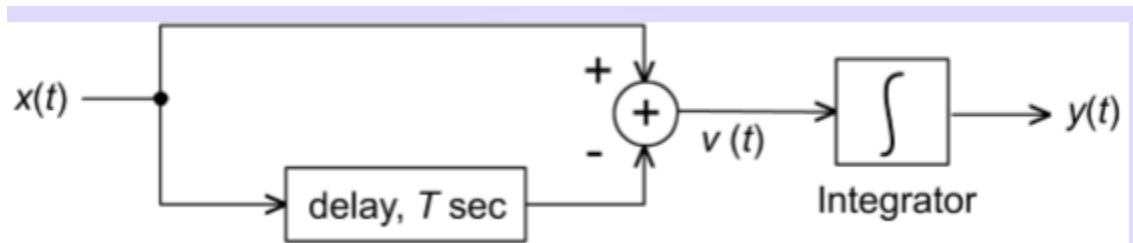
- a. Find $X(f)$ and $H(f)$
 b. Find the output energy spectral density
 c. Use the convolution integral to find $y(t)$
 9. The input $x(t)$ and the impulse response $h(t)$ of a LTI system are

$$x(t) = \begin{cases} 2, & |t| < 2 \\ 0, & \text{outside} \end{cases}$$

$$h(t) = \begin{cases} 2e^{-t}, & t \geq 0 \\ 0, & \text{outside} \end{cases}$$

find the output $y(t)$

10. Find the impulse response of the system:



11. Find the period, and find the Fourier series representation of the following periodic signals

a) $x(t) = 2 \cos(200\pi t) + 5 \sin(400\pi t)$

b) $x(t) = 2 \cos(200\pi t) + 5 \sin(300\pi t)$

c) $x(t) = 2 \cos(150\pi t) + 5 \sin(250\pi t)$

12. Consider the following signal

$$\begin{aligned} x(t) &= \cos(2\pi f_1 t) + a \sin(2\pi f_1 t) \\ &= X_A(a) \cos(2\pi f_1 t + X_p(a)) \end{aligned}$$

- Find $X_A(a)$.
- Find $X_p(a)$.
- What is the power of $x(t)$, P_x ?
- Is $x(t)$ periodic? If so what is the period and the Fourier series representation of $x(t)$?

13. The input-output characteristic of a channel is described by the differential equation:

$$dy(t)/dt + 2y(t) = 4x(t)$$

- Find the transfer function, $H(f)$, of the channel.
- Find the 3-dB bandwidth of the channel.

14. Let $m(t)$ be a baseband signal with Fourier transform

$$M(f) = \begin{cases} m_0 & -f_m \leq f \leq f_m \\ 0 & \text{otherwise} \end{cases}$$

Let $\hat{m}(t)$ be the Hilbert transform of $m(t)$, find the energy in $\hat{m}(t)$.

15. The impulse response of a linear time-invariant system is given by:

$$h(t) = e^{-2\pi B t} u(t)$$

- Is this system causal? Explain
- Is this system stable? Explain
- Find $\int_0^5 h(t) \delta(t-1) dt$

16. The Fourier transform of a time signal $m(t)$ is given by:

$$M(f) = \frac{1}{1+j(f/B)}$$

- Find the 6-dB bandwidth of the message
- Find $M(f) \delta(f-B)$

17. Consider the signal $g(t) = e^{-a|t|}$.

- Explain why this signal is an energy signal.
- Find and sketch the energy spectral density of $g(t)$.
- Find the total energy in $g(t)$.
- Find the 3-dB bandwidth of $g(t)$.
- Find the fraction of the signal energy contained in the bandwidth of Part d relative to the total signal energy.

18. A periodic signal $x(t)$ defined over one period is:

$$x(t) = \begin{cases} a|t| & -T_0/2 \leq t \leq T_0/2 \\ 0 & |f| > W \end{cases};$$

Find the Fourier series coefficient a_n , $n = 1, 3, 5$.

19. Consider the signal $g(t) = e^{-2\pi Bt} u(t)$.
- Find the autocorrelation function $R_g(\tau)$.
 - Find the energy spectral density.
 - Find the energy in the signal.
 - Find the 3-dB bandwidth of the signal.