

Chapter 18

Friday, August 5, 2016 7:40 PM

18.1 Kinetic energy

If a rigid body has a velocity \vec{v}_G , an angular velocity ω , and a mass m , a mass moment of inertia I_G then its kinetic energy is calculated by:

$$T = \frac{1}{2} m v_G^2 + \frac{1}{2} I_G \omega^2$$

- Translation $\omega = 0$

$$T = \frac{1}{2} m v_G^2$$

- Rotation about a fixed axis $v_G = \omega r_G$

$$T = \frac{1}{2} m (\omega r_G)^2 + \frac{1}{2} I_G \omega^2$$

$$= \frac{1}{2} (m r_G^2 + I_G) \omega^2$$

$$T = \frac{1}{2} I_O \omega^2 \rightarrow O \text{ is a point on the axis of rotation.}$$

Note $T = \frac{1}{2} I_C \omega^2$

18.2 Work of a force

Revision: $U = \int \vec{F} \cdot d\vec{r}$

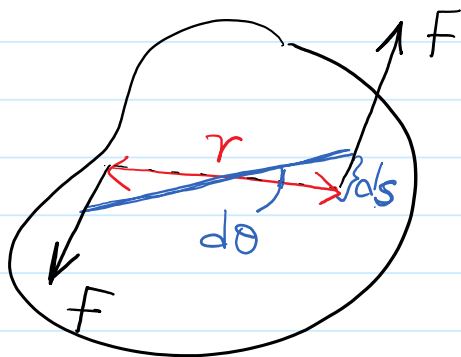
constant force $\Rightarrow U = F \cos \theta r$

Weight $\Rightarrow U_w = -W \Delta y$

Spring force $\Rightarrow U_s = -\frac{1}{2} k (s_2^2 - s_1^2)$

Friction force $\begin{cases} \rightarrow \text{No slipping} \rightarrow \text{No work} \\ \rightarrow \text{Slipping} \rightarrow \text{it does work.} \end{cases}$

18.3 Work of a couple moment



$ds = \frac{r}{2} d\theta$, $M = Fr$

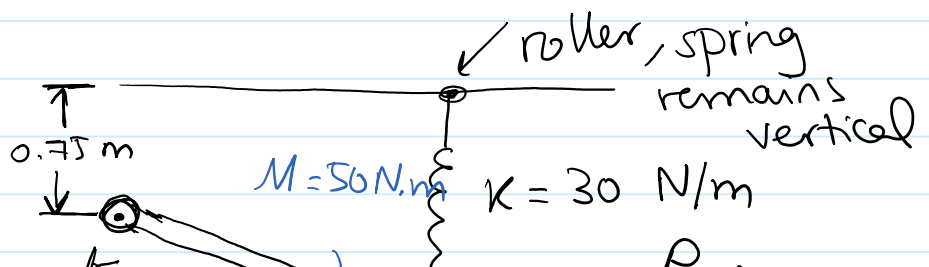
$dU_M = F \frac{r}{2} d\theta + F \frac{r}{2} d\theta$

$\int dU_M = \int Fr d\theta$

$U_M = \int_{\theta_1}^{\theta_2} Fr d\theta$

$U_M = \int_{\theta_1}^{\theta_2} M d\theta$

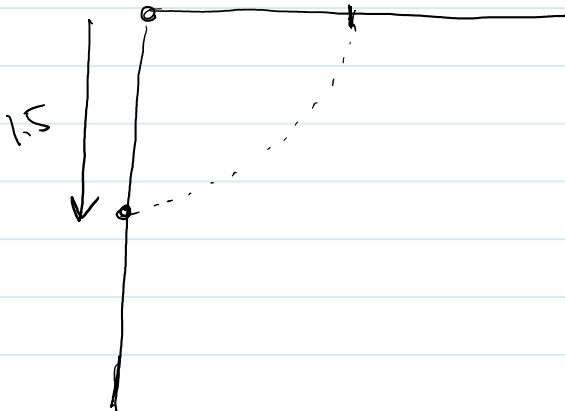
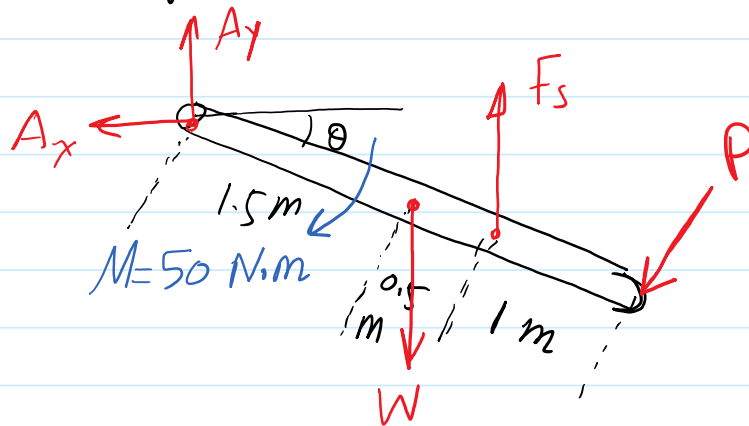
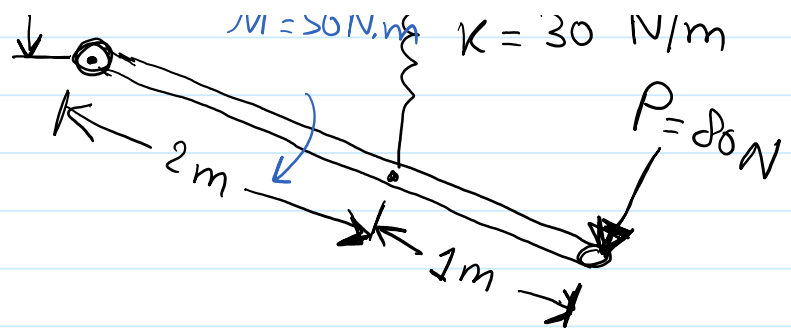
example



$$m = 10 \text{ kg}$$

$$S_{\text{unst}} = 0.5 \text{ m}$$

Find Work done from $\theta = 0^\circ$, $\theta = 90^\circ$



$$U_W = 98.1 (1.5)$$

$$U_W = 147.2 \text{ J}$$

$$U_M = M(\theta_2 - \theta_1)$$

$$= 50 \left(\frac{\pi}{2} - 0 \right)$$

$$U_M = 78.5 \text{ J}$$

$$\text{@ } \theta = 0^\circ \quad S_1 = 0.75 - 0.5 = 0.25 \text{ m}$$

$$\text{@ } \theta = 90^\circ \quad S_2 = 2 + 0.75 - 0.5 = 2.25 \text{ m}$$

$$U_S = -\frac{1}{2} 30 (2.25^2 - 0.25^2) = -75 \text{ J}$$

P moves the bar in a curve

$$S = \frac{\pi}{2} 3 = 4.712 \text{ m}$$

$$U_p = 80 (4.712) = 377 \text{ J}$$

Pin reactions A_x , A_y do no work

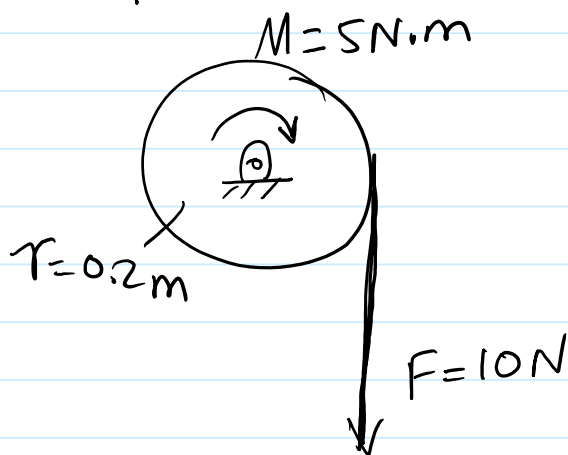
$$\text{Total Work} = U_T = 147.2 + 78.5 - 75 + 377$$

$$U_T = 528 \text{ J}$$

18.4 Principle of Work & Energy

$$T_2 = T_1 + \Sigma U_{1 \rightarrow 2}$$

example



$$m = 30 \text{ kg}$$

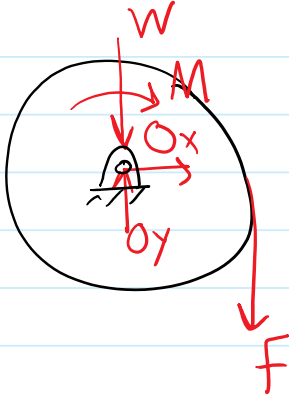
find # of rev to get to

$\omega = 20 \text{ rad/s}$
starting from rest

$$T_2 = T_1 + U_{1 \rightarrow 2}$$

$$T_2 = \frac{1}{2} I_0 \omega_2^2 = \frac{1}{2} \left(\frac{1}{2} m r^2 \right) (2\theta)^2 = 120 \text{ J}$$

$$T_1 = 0$$



$$U_{1-2} = U_M + U_F$$

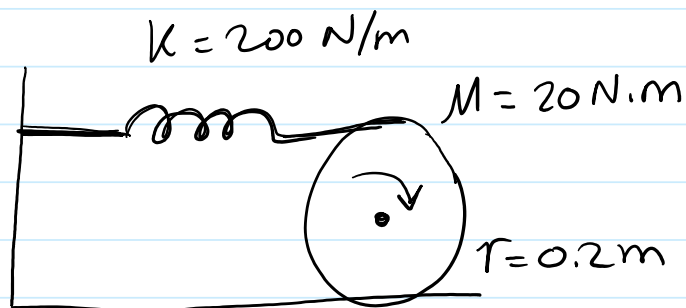
$$= M\theta + F s'$$

$$= 5\theta + 10(r\theta)$$

$$120 = 0 + 5\theta + 20 \Rightarrow \theta = 17.14 \text{ rad}$$

$$\boxed{\theta = 2.73 \text{ rev}}$$

example

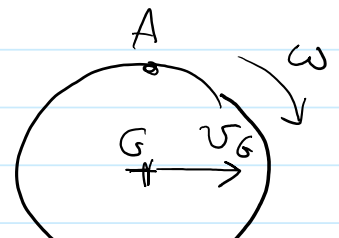


$W = 200 \text{ N}$
 $k_G = 0.15$
 rolls from rest
 without slipping

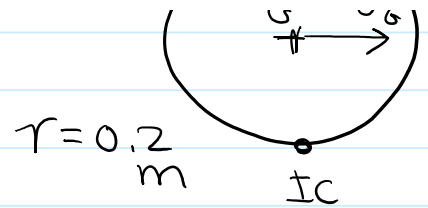
Find ω after G moves 0.1 m
 spring is initially unstretched.

$$T_1 = 0$$

$$T_2 = \frac{1}{2} m v_G^2 + \frac{1}{2} I_G \omega_2^2$$



$$T_2 = \frac{1}{2} m v_G^2 + \frac{1}{2} I_G \omega_2^2$$



$$T_2 = \frac{1}{2} I_{Ic} \omega_2^2$$

$$= \frac{1}{2} (I_G + m d^2) \omega_2^2$$

$$= \frac{1}{2} \left(\frac{200}{9.81} (0.15)^2 + \frac{200}{9.81} (0.2)^2 \right) \omega_2^2 = 0.6371 \omega_2^2$$

$$U_W = 0, \Delta y = 0$$

$$U_{fB} = 0, \text{ No slipping}$$

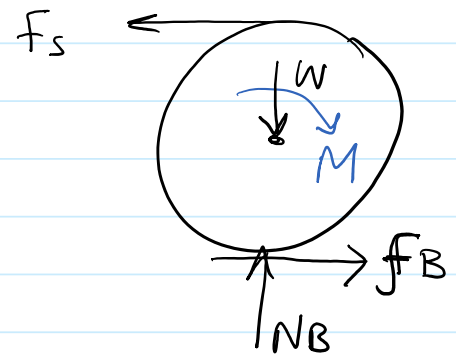
$$U_{NB} = 0, \text{ Reaction force}$$

$$U_M = M \theta \quad \theta = S_G / r_{G/Ic} = 0.1 / 0.2 = 0.5 \text{ rad}$$

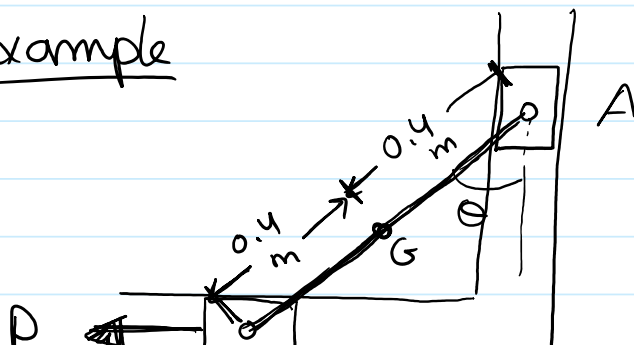
$$U_s = \frac{1}{2} k s^2, \quad s_A = r_{A/Ic} \theta = (0.4)(0.5) = 0.2 \text{ m}$$

$$T_1 + U_s + U_M = T_2$$

$$\boxed{\omega = 3.07 \text{ rad/s} \curvearrowright}$$



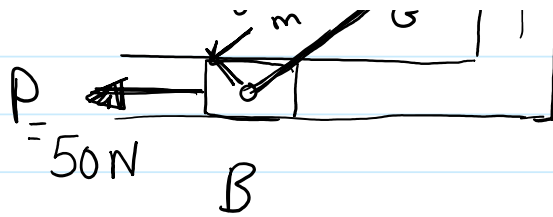
example



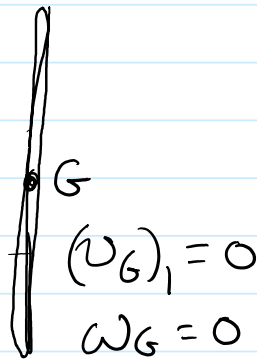
$$m = 10 \text{ kg}$$

rod is at rest @ $\theta = 0^\circ$

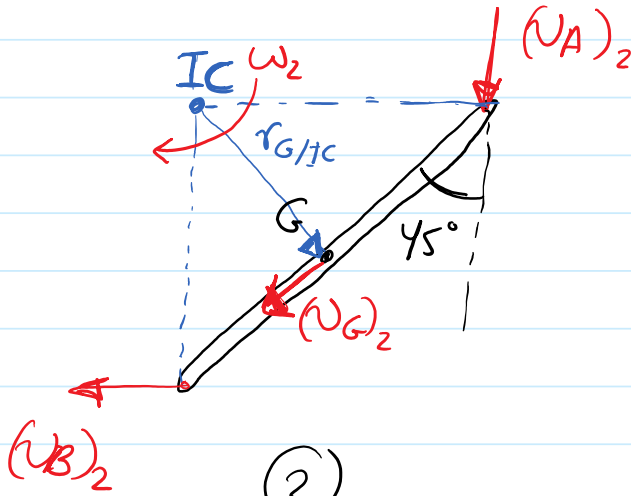
find ω @ $\theta = 45^\circ$



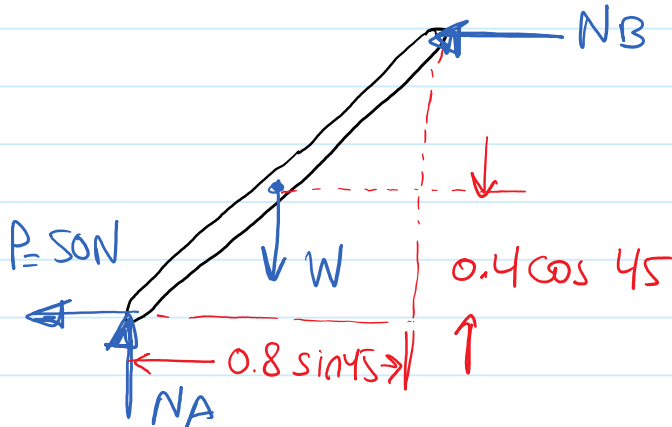
find ω @ $\theta = 45^\circ$



①



②



$$r_{G/IC} = 0.4 \tan 45$$

$$(v_G)_2 = r_{G/IC} \omega_2$$

$$(v_G)_2 = 0.4 \omega_2$$

$$T_2 = T_1 + U_{1 \rightarrow 2}$$

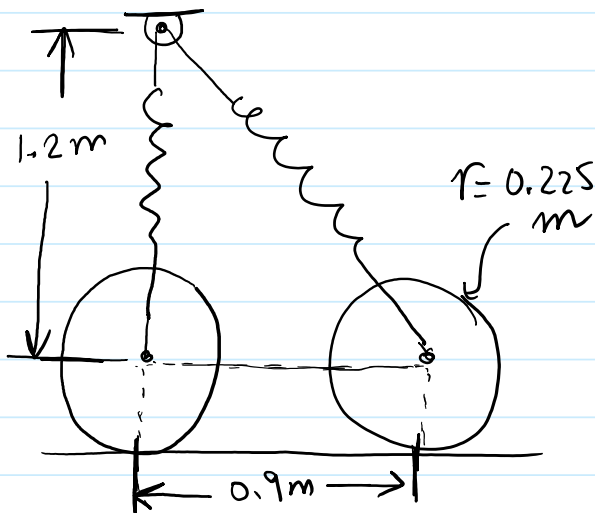
$$\frac{1}{2} m (v_G)_2^2 + \frac{1}{2} I_G \omega_2^2 = 0 + U_W + U_P$$

$$\frac{1}{2} m (0.4 \omega_2)^2 + \frac{1}{2} \times \frac{1}{12} m \omega_2^2 = W(0.4 - 0.4 \cos 45) + P(0.8 \sin 45)$$

$$\omega_2 = 6.11 \text{ rad/s } \curvearrowright$$

18.5 Conservation of Energy

If all forces are conservative $\rightarrow T_1 + V_1 = T_2 + V_2$



$$m = 15 \text{ kg}$$

$$k_G = 0.18 \text{ m}$$

$$k = 30 \text{ N/m}$$

$$\text{unstretched length} = 0.3 \text{ m}$$

released from rest.

find ω when G moves to the left 0.9 m

$$V_1 = V_e = \frac{1}{2} k S_1^2 = \frac{1}{2} (30) (\sqrt{1.2^2 + 0.9^2} - 0.3) = 21.6 \text{ J}$$

$$V_2 = V_e = \frac{1}{2} k S_2^2 = \frac{1}{2} (30) (1.2 - 0.3)^2 = 12.15 \text{ J}$$

$$T_1 = 0$$

$$T_2 = \frac{1}{2} I_G \omega_2^2 = \frac{1}{2} (I_G + m r^2) \omega_2^2$$

$$\text{or } \frac{1}{2} m v_G^2 + \frac{1}{2} I_G \omega_2^2$$

\downarrow
 $(\omega r)^2$

$$T_1 + V_1 = T_2 + V_2 \Rightarrow \omega = 3.9 \text{ rad/s } \curvearrowright$$