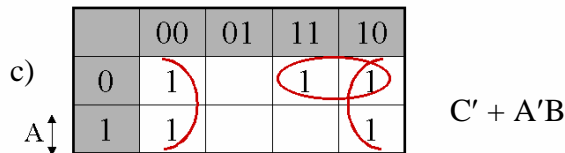
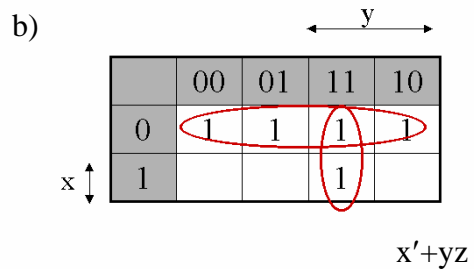
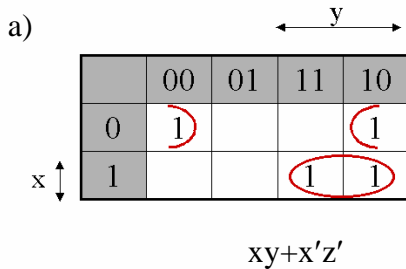


ECE-223, Solutions for Assignment #3

Chapter 3, Digital Design, M. Mano, 3rd Edition

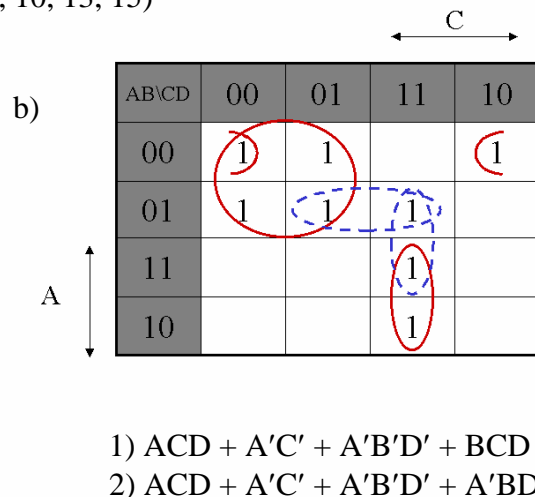
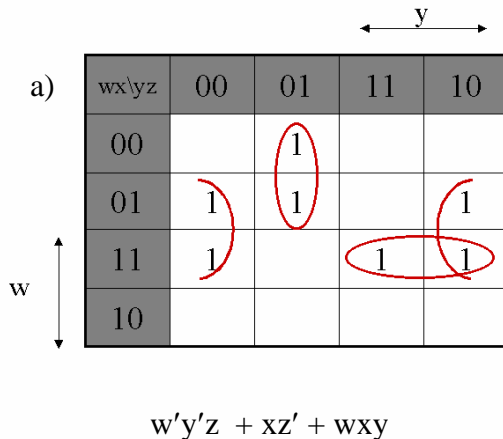
3.3) Simplify the following Boolean functions, using three-variable maps:

- a) $xy + x'y'z' + x'yz'$
- b) $x'y' + yz + x'yz'$
- c) $A'B + BC' + B'C'$



3.5) Simplify the following Boolean functions, using four-variable maps:

- a) $F(w, x, y, z) = \sum (1, 4, 5, 6, 12, 14, 15)$
- b) $F(A, B, C, D) = \sum (0, 1, 2, 4, 5, 7, 11, 15)$
- c) $F(w, x, y, z) = \sum (2, 3, 10, 11, 12, 13, 14, 15)$
- d) $F(A, B, C, D) = \sum (0, 2, 4, 5, 6, 7, 8, 10, 13, 15)$



c)

| wx\yz | 00 | 01 | 11 | 10 |
|-------|----|----|----|----|
| 00 | | | 1 | 1 |
| 01 | | | | |
| 11 | 1 | 1 | 1 | 1 |
| 10 | | | 1 | 1 |

$$wx + x'y$$

d)

| ABCD | 00 | 01 | 11 | 10 |
|------|----|----|----|----|
| 00 | 1 | | | 1 |
| 01 | 1 | 1 | 1 | 1 |
| 11 | | | 1 | 1 |
| 10 | 1 | | | 1 |

$$BD + B'D' + A'B$$

3.12) Simplify the following Boolean functions in products of sums:

a) $F(w, x, y, z) = \sum (0, 2, 5, 6, 7, 8, 10)$

b) $F(A, B, C, D) = \prod (1, 3, 5, 7, 13, 15)$

a)

| wx\yz | 00 | 01 | 11 | 10 |
|-------|----|----|----|----|
| 00 | 1 | 0 | 0 | 1 |
| 01 | 0 | 1 | 1 | 1 |
| 11 | 0 | 0 | 0 | 0 |
| 10 | 1 | 0 | 0 | 1 |

$$F' = wx + x'z + xy'z'$$

$$F = (w' + x')(x + z')(x' + y + z)$$

b)

| AB\CD | 00 | 01 | 11 | 10 |
|-------|----|----|----|----|
| 00 | | 0 | 0 | |
| 01 | | 0 | 0 | |
| 11 | | 0 | 0 | |
| 10 | | | | |

$$F' = BD + A'D$$

$$F = (B' + D')(A + D')$$

3.13) Simplify the following expressions in (1) sum of the products and (2) products of sums:

- a) $x'z' + y'z' + yz' + xy$
- b) $AC' + B'D + A'CD + ABCD$
- c) $(A' + B' + D')(A + B' + C')(A' + B + D')(B + C' + D')$

a)

| | | | | | |
|-----|------|-------|----|----|----|
| | | ← y → | | | |
| x ↓ | x\yz | 00 | 01 | 11 | 10 |
| | 0 | 1 | 0 | 0 | 1 |
| | 1 | 1 | 0 | 1 | 1 |

$$F = xy + z' = (x+z')(y+z')$$

b)

| | | | | | |
|-----|-------|-------|----|----|----|
| | | ← C → | | | |
| A ↑ | AB\CD | 00 | 01 | 11 | 10 |
| | 00 | 0 | 1 | 1 | 0 |
| | 01 | 0 | 0 | 1 | 0 |
| | 11 | 1 | 1 | 1 | 0 |
| | 10 | 1 | 1 | 1 | 0 |

$$F = AC' + CD + B'D = (A+D)(C'+D)(A+B'+C)$$

c)

| | | | | | |
|-----|-------|-------|----|----|----|
| | | ← C → | | | |
| A ↑ | AB\CD | 00 | 01 | 11 | 10 |
| | 00 | 1 | 1 | 0 | 1 |
| | 01 | 1 | 1 | 0 | 0 |
| | 11 | 1 | 0 | 0 | 1 |
| | 10 | 1 | 0 | 0 | 1 |

$$F = B'D' + AD' + A'C' = (A'+D')(C'+D')(A+B'+C')$$

3.15) Simplify the following Boolean function F , together with the don't-care conditions d , and then express the simplified function in sum of minterms:

- a) $F(x, y, z) = \sum (0, 1, 2, 4, 5)$, $d(x, y, z) = \sum(3, 6, 7)$
- b) $F(A, B, C, D) = \sum (0, 6, 8, 13, 14)$, $d(A, B, C, D) = \sum (2, 4, 10)$
- c) $F(A, B, C, D) = \sum (1,3,5,7,9,15)$, $d(A, B, C, D) = \sum (4,6,12,13)$

a)

| | | | | | |
|-----|------|-------|----|----|----|
| | | ← y → | | | |
| | x\yz | 00 | 01 | 11 | 10 |
| | 0 | 1 | 1 | x | 1 |
| x ↑ | 1 | 1 | 1 | x | x |

$$F = 1 = \sum (0, 1, 2, 3, 4, 5, 6, 7)$$

b)

| | | | | | |
|-----|------|-------|----|----|----|
| | | ← C → | | | |
| | ABCD | 00 | 01 | 11 | 10 |
| | 00 | 1 | | | X |
| | 01 | X | | | 1 |
| A ↑ | 11 | | 1 | | 1 |
| | 10 | 1 | | | X |

$$F = B'D' + CD' + ABC'D$$

$$= \sum (0, 2, 6, 8, 10, 13, 14)$$

c)

| | | | | | |
|-----|------|-------|----|----|----|
| | | ← C → | | | |
| | ABCD | 00 | 01 | 11 | 10 |
| | 00 | | 1 | 1 | |
| | 01 | X | 1 | 1 | X |
| A ↑ | 11 | X | X | 1 | |
| | 10 | | 1 | | |

$$F = A'D + BD + C'D$$

$$= \sum (1, 3, 5, 7, 9, 13, 15)$$

3.16) Simplify the following expressions, and implement them with two-level NAND gate circuits:

a) $AB' + ABD + ABD' + A'C'D' + A'BC'$

b) $BD + BCD' + AB'C'D'$

a)

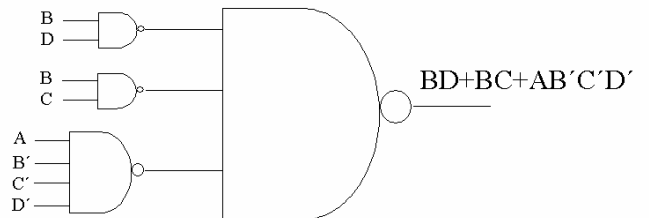
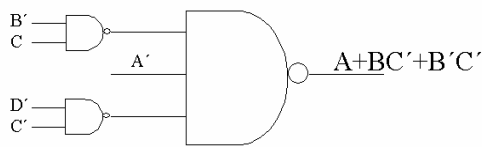
| | | ← C → | | | |
|-----|----|-------|----|----|----|
| | | 00 | 01 | 11 | 10 |
| A ↑ | 00 | 1 | 0 | 0 | 0 |
| | 01 | 1 | 1 | 0 | 0 |
| | 11 | 1 | 1 | 1 | 1 |
| | 10 | 1 | 1 | 1 | 1 |
| | 10 | 1 | 1 | 1 | 1 |

$$F = A + BC' + C'D'$$

b)

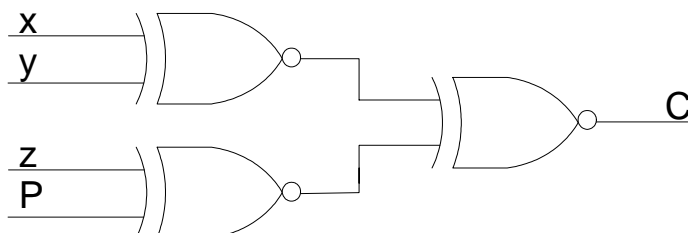
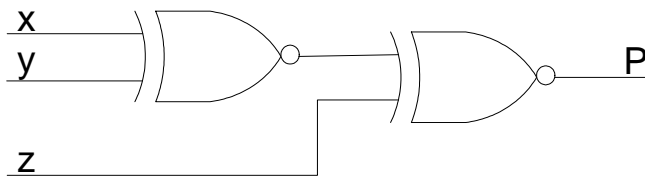
| | | ← C → | | | |
|-----|----|-------|----|----|----|
| | | 00 | 01 | 11 | 10 |
| A ↑ | 00 | 0 | 0 | 0 | 0 |
| | 01 | 0 | 1 | 1 | 1 |
| | 11 | 0 | 1 | 1 | 1 |
| | 10 | 1 | 0 | 0 | 0 |
| | 10 | 1 | 0 | 0 | 0 |

$$F = BD + BC + AB'C'D'$$



3.28) Derive the circuits for a three-bit parity generator and four-bit parity checker using odd parity bit.

Same as Parity generator described in pages 97-99, Digital Design, M. Mano, 3rd edition



3.29) Implement the following four Boolean expressions with three half adders

- a) $D = A \oplus B \oplus C$
- b) $E = A'BC + AB'C$
- c) $F = ABC' + (A' + B')C$
- d) $G = ABC$

